

# OFISI YA RAIS

TAWALA ZA MIKOA NA SERIKALI ZA MITAA

HALMASHAURI YA WILAYA YA KISHAPU

MTIHANI WA UTAMILIFU DARASA LA SABA

KISWAHILI

Muda: Saa 1:30

MACHI 2024

## MAELEKEZO

- Karatasi hii ina maswali sita yenye sehemu A, B, na C
- Jibu maswali yote katika kila sehemu
- Majibu yote yaandikwe katika nafasi zilizotolewa katika swali
- Andika jina lako na namba ya upimaji katika sehemu ya juu ya karatasi hii
- Simu za mkononi haziruhusiwi katika chumba cha mtihani

**SEHEMU A: UFAHAMU**

1. **Sikiliza kwa makini hadithi utakayosomewa kisha jibu swali la 1 mpaka la 5 kwa kuweka kivuli herufi ya jibu sahihi**
- (i) **Jina la mwizi katika hadithi uliyosomewa anaitwa nani?**  
 (a) Nyangangali (b) Mariam (c) Shika  
 (d) Mwizi (e) Pekecha [ ]
- (ii) **Mali iliyoibwa ilikuwa mali ya nani?**  
 (a) Shule (b) Polisi (c) Watu wenye hasira  
 (d) Nyangali (e) Mgangali [ ]
- (iii) **Alipoingia ndani ya gari alipelekwa wapi?**  
 (a) Kituo cha afya (b) Kituo cha polisi (c) Mahakamani  
 (d) Nyumbani (e) Shuleni [ ]
- (iv) **Mama yake mwizi anaitwa nani?**  
 (a) Hadija (b) Shida (c) Mariam  
 (d) Sophia (e) Jeda [ ]
- (v) **Hakimu aliyehukumu kesi hiyo anaitwa nani?**  
 (a) Mganga (b) Mariam (c) Ngangali  
 (d) Shida (e) Polisi [ ]
2. **(Chagua herufi ya jibu sahihi)**
- (i) **Katika sentensi “Juma alikuwa anaandika darasani” neno alikuwa linasimama kama aina gani ya neno? (a) Kitenzi kikuu (b) Kitenzi kisaidizi (c) Kitenzi kishirikishi (d) Kielezi cha nomino (e) Kivumishi** [ ]
- (ii) **Usemi “ Nyota ya Jaha” una maana sawa na**  
 (a) Jua la mchana (b) Nyota ya asubuhi (c) Bahati nzuri  
 (d) Bahati mbaya (e) Nyota ya mganga [ ]
- (iii) **Mwalimu Masawe alitumia tendo anaandika ambalo limeundwa na**  
 (a) Mzizi wa pekee (b) Mofimu pekee (c) Nomino na kivumishi  
 (d) Mzizi na motifu (e) Kielelezo cha sehemu [ ]
- (iv) **Kiambishi cha wakati timilifu katika neno amekimbia ambalo mwalimu alitumia kufunga sentensi hii ni**  
 (a) a (b) me (c) ki  
 (d) mbi (e) an [ ]
- (v) **“Gari letu limeharibika vibaya” Sentensi hiyo ipo katika kauli gani?**  
 (a) Kutenda (b) Kutendeka (c) Kutendewa  
 (d) Kutendwa (e) Kutendana [ ]

- (vi) Kiatu changu ni kijani chako ni cheupe. Neno chako ni aina gani ya neno  
 (a) Kivumishi (b) Kiwakilishi (c) Kielezi  
 (d) kitenzi (e) Kihisishi [ ]
- (vii) Aje kesho kutwa asubuhi ni muundo gani anaonesha uainishaji fasaha?  
 (a) T + E (b) N + V + T + E (c) t + E  
 (d) Ts + E (e) T + E + N + E + E + U + N [ ]
- (viii) Lile jiwe kubwa lilitumbukia mtoni  
 (a) Kacha (b) Chubwi! (c) Puu!  
 (d) Pruu! (e) Tii [ ]
- (ix) "Tunafundisha wanafunzi masomo yote ya biashara. Sentensi hiyo ipo katika wakati gani?  
 (a) Ujao (b) Uliopita (c) Timilifu  
 (d) Uliopo (e) Mazoea [ ]
- (x) "Mwanakondo amesema kuwa hatakubari wamsumbue" Hii ni kauli gani?  
 (a) Taarifa (b) Mazoea (c) Ukanushi

3. Chunguza maneno yaliyopo kwenye kisanduku na ukamilishe sentensi ulizopewa

Huathiri, Halina ubani, Huadhiri, Halinuki, Mbolea, Hana budi, Si budi, Mhariri, Timilifu, Ni budi, Halisi, Halina dawa, Taarifa, Mkalimani
---

- i/ Mtu anayetafsiri maongezi kutoka lugha moja kwenda nyingine ni \_\_\_\_\_
- ii/ Mwanafunzi hodari \_\_\_\_\_ kusoma kwa bidii
- iii/ Kamilisha methali hii. La kuvunda \_\_\_\_\_
- iv/ Mama alituambia kwamba, hakika tutakiona cha Mtema kuni. Sentensi hii ipo katika kauli gani? \_\_\_\_\_
- v. Ugonjwa wa korona \_\_\_\_\_ zaidi mapafu (c) Kuwa hohehahe

SEHEMU B: UTUNGAJI

4. Panga sentensi zifuatazo ili zilete maana nzuri kwa mtiririko wa herufi A, B, C, D na E

- (i) Shuleni ni mahali pazuri [ ]
- (ii) Maarifa wanayoyapata ni akiba yao ya baadae [ ]
- (iii) Wale watakao yatumia vizuri yatawawezesha kuishi kwa kujitegemea [ ]
- (iv) Watayatumia wakiwa shuleni au baade wakiwa wakubwa [ ]
- (v) Wanafunzi hujifunza maarifa mengi [ ]

**5. Jaza nafasi zilizoachwa wazi**

i/ Kama leo ni Jumatano, Mtondogoo itakuwa ni siku gani? \_\_\_\_\_

ii/ Andika neno lenye maana sawa na bakora \_\_\_\_\_

iii/ Mtoto wa mwisho kuzaliwa huitwa \_\_\_\_\_

iv/ Andika neno linalojumuisha maneno yafuatayo Almasi, dhahabu, shaba na ulanga \_\_\_\_\_

v/ Andika umoja wa sentensi ifuatayo  
“Ng’ombe wetu wana madoadoa” \_\_\_\_\_  
\_\_\_\_\_**SEHEMU C: UFAHAMU****6. Soma shairi lifuatalo kisha jibu swali la 41 - 45**

Uchumi hudidimia, wenye nguvu hupotea,  
Wagonjwa waliojifia, takwimu zinazidia,  
Yatima wadidimia, wanaongezeka pia,  
Ndugu tujihadharini, Ukimwi hasa ni kifo.

Kwa kuzuia, yafuatayo sikia,  
Mtu hushika sheria, nazo kanuni za ndoa,  
Uasherati kuachia, uzinzi kusikia, Ndugu  
tujihadharini, Ukimwi hasa ni kifo.

**MASWALI**(i) Shairi lenye mistari minne huitwaje?  
\_\_\_\_\_(ii) Andika kibwagizo cha shairi hili  
\_\_\_\_\_(iii) Mshororo wa pili katika ubeti wa pili una mizani mingapi  
\_\_\_\_\_(iv) Andika athari moja ya ugonjwa uliotajwa katika shairi hapo juu  
\_\_\_\_\_(v) Kichwa cha shairi hili kingefaa kiweje?  
\_\_\_\_\_

# OFISI YA RAIS

TAWALA ZA MIKOA NA SERIKALI ZA MITAA

HALMASHAURI YA WILAYA YA KISHAPU

MTIHANI WA UTAMILIFU DARASA LA SABA

URAI NA MAADILI

Muda: Saa 1:30

MACHI 2024

## MAELEKEZO

- Karatasi hii ina maswali sita yenye sehemu A, B, na C
- Jibu maswali yote katika kila sehemu
- Majibu yote yaandikwe katika nafasi zilizotolewa katika swali
- Andika jina lako na namba ya upimaji katika sehemu ya juu ya karatasi hii
- Simu za mkononi haziruhusiwi katika chumba cha mtihani

**SEHEMU A:**

1. **Chagua jibu sahihi kisha weka kivuli kwenye herufi ya jibu sahihi**
- (i) Kwa sasa Amina ana miaka 12. Baada ya miaka mingapi atafikia umri wa kugombea kuwa Rais wa Tanzania?  
 (a) Miaka 24 (b) Miaka 11 (c) Miaka 6  
 (d) Miaka 28 (e) Miaka 20 [ ]
- (ii) Jaji mkuu wa Jamhuri ya Muungano wa Tanzania kwa hivi sasa ni Pro. Ibrahim Juma. Ni jinsi gani amekuwa jaji mkuu?  
 (a) Kuchaguliwa na raia wa Tanzania (b) Kuteuliwa na spika wa bunge  
 (c) Kuteuliwa na Rais (d) Kuchaguliwa na madiwani (e) Kuchaguliwa na wabunge [ ]
- (iii) Mwalimu alifundisha njia mbalimbali za kuhamasisha jamii kutoa misaada kwa wahitaji. Ni njia ipi hakufundisha?  
 (a) Mitandao ya kijamii (b) Midahalo na makongomano (c) Mabango na vipeperushi  
 (d) Vyombo vya habari (e) Huduma ya kisheria [ ]
- (iv) Umpewa jukumu la kuelezea umuhimu wa kuhudumia na kuwafariji wahitaji katika jamii. Je, ungeeleza hoja zipi?  
 (a) Kulinda haki za binadamu (b) Kuongeza chuki (c) Mikutano ya hadhara  
 (d) Vyombo vya habari (e) Kujenga migogoro [ ]
- (v) Tanzania ina rasilimali nyingi sana. Je, ni kitendo gani ya hivi huchangia kuharibu rasilimali maji  
 (a) Kutotiririsha maji machafu (b) Kukata miti kwenye vyanzo vya maji  
 (c) Kutochoma moto misitu (d) Kufuga samaki (e) Kulinda vyanzo vya maji [ ]
- (vi) Shule ni sehemu ya jamii ambayo mwanafunzi hupata elimu. Vifuatavyo ni vitu muhimu kwa ajili ya maendeleo ya shule isipokuwa  
 (a) Chakula (b) Vinywaji kama soda na bia (c) Vifaa  
 (d) Maji (e) Umeme [ ]
- (vii) Ufaulu wa wanafunzi hutegemea vitu vingi sana. Andika lenye utaratibu maalumu wa jinsi ya kuratibu shughuli mbalimbali zinazofanyika bila malipo au kulazimishwa huitwaje?  
 (a) Malengo (b) Mpango kazi (c) Mpango kazi wa  
 (d) Ratiba (e) Michango ya hiari (e) Kujitolea [ ]
- (viii) Kuna njia nyingi za kupata misaada ya kusaidia maendeleo ya shule. Tukio la kuuza na kununua vitu kwa kushindanisha bei ni  
 (a) Mnada (b) Soko (c) Hisani  
 (d) Chakula cha hisani (e) Harambee [ ]
- (ix) Umoja wa mataifa wenye makao yake mjini New York Marekani ulitangaza tarehe ya kuhamasisha amani duniani. Je, tarehe hiyo ni ipi?  
 (a) 21 Septemba (b) 1 Mei (c) 9 Desemba  
 (d) 7 Julai (e) 24 Oktoba [ ]
- (x) Uhuru wa kitaifa ni hali ya taifa moja kutotawaliwa na mtu au nchi nyingine. Jukumu la kulinda uhuru na umoja wa Taifa letu ni jukumu la nani?  
 (a) Usalama wa Taifa tu (b) Polisi tu (c) Idara ya uhamiaji tu  
 (d) Kila mwananchi (e) Jeshi la magereza tu [ ]

2. Oanisha kwa usahihi kifungu A kwa kuandika herufi ya jibu sahihi kutoka katika kifungu B ili kuleta maana iliyokusudiwa

KIFUNGU AJIBUKIFUNGU B

- i/ Alama ya Taifa ya katikati ya bendera ya Rais (i. \_\_\_\_\_] A. Mahakama
- ii/ Kiongozi wa shule anayeshughulikia shughuli za kitaaluma kila siku (ii. \_\_\_\_\_] B. Madarasa ya shule
- ii/ Kundi la wahitaji katika jamii [iii. \_\_\_\_\_] C. Baraza la halmashauri
- iv/ Kila ambacho hukiwezi kutambulisha uwepo wa shule yako [iv. \_\_\_\_\_] D. Nembo ya shule
- v/ Taasisi ipi inahusika kutunga sheria ndogondogo katika ngazi ya Halmashauri ya wilaya [v. \_\_\_\_\_] E. Waathirika wa majanga
- F. Nembo ya Taifa
- G. Watu wenye ulemavu
- H. Mkuu wa shule
- I. Mwalimu wa taaluma

3. Jaza nafasi zilizoachwa wazi kwa kuchagua jibu sahihi kutoka kwenye kisanduku ulichopewa

Baba na mama, Malawi, Urejelezaji, Familia pana, 2007, Jamhuri ya Kidemokrasia ya Kongo, Utii wa sheria za shule, 2005, Anapenda kusifiwa

- i/ Jeshi la ukozi na kupambana na majanga ya moto nchini Tanzania liliundwa mwaka \_\_\_\_\_
- ii/ Kitendo cha kutumia taka kuzalisha malighafi mpya hujulikana kama? \_\_\_\_\_
- iii/ Waanzilishi wa jumuiya ya Afrika Mashariki ni Tanzania, Kenya na Uganda. Ni nchi ipi imejiunga na umoja huo hivi karibuni? \_\_\_\_\_
- iv/ John ni mwanafunzi anayefika shule mapema kila siku. Kitendo hiki kinaitwaje? \_\_\_\_\_
- v. Mjomba, Shangazi, bibi na wazazi wangu wanaishi katika nyumba moja. Je hii ni aina gani ya familia \_\_\_\_\_

4. SEHEMU B: (Alama 10) Andika majibu sahihi

(i). Wajibu ni kazi au shughuli zinazopaswa kutekelezwa. Taja majukumu mawili tu ya wanafunzi viongozi shuleni katika kutunza mazingira ya shule

(i) \_\_\_\_\_

(ii) \_\_\_\_\_

- (ii) Taja kwa ufupi madhara mawili ya ukeketaji kwa watoto wa kike  
 (i) \_\_\_\_\_  
 (ii) \_\_\_\_\_
- (iii) Kodi ni njia mojawapo ya mapato katika jamii zetu. Bainisha faida mbili za kulipa kodi  
 (i) \_\_\_\_\_  
 (ii) \_\_\_\_\_
- (iv) Rushwa ni adui mkubwa wa haki katika jamii. Onesha madhara mawili ya kutoa na kupokea rushwa  
 (i) \_\_\_\_\_  
 (ii) \_\_\_\_\_
- (v) Uharibifu wa mazingira una madhara makubwa katika jamii zetu. Onesha madhara yatokanayo na uharibifu huo  
 (i) \_\_\_\_\_  
 (ii) \_\_\_\_\_

5. Jaza nafasi zilizoachwa wazi kwa kuandika majibu mafupi katika maswali yafuatayo

- i/ Nani anawajibu wa kuandaa ratiba ya zamu ya walimu shuleni? \_\_\_\_\_
- ii/ Mtu ambaye amesomea masuala ya kutoa ushauri kwa watu wenye changamoto mbalimbali katika jamii huitwa? \_\_\_\_\_
- iii/ Mfumo wa mahakama chini Tanzania unaongozwa na \_\_\_\_\_
- iv. Fedha ya Tanzania imegawanyika katika makundi mawili ambayo ni sarafu na noti. Mnyama yupi anapatikana katika sarafu ya shilingi mia tano \_\_\_\_\_
- v. Ni taasisi ipi nchini Tanzania inawajibika katika utoaji wa makundi ya uraia?  
 \_\_\_\_\_

SEHEMU C: (ALAMA 10)

6. Panga upya orodha ya sikukuu zinazoadhimishwa kitaifa nchini Tanzania kulingana na tarehe na mwezi kwa mwaka mzima kwa kuzipa herufi A - E

- i/ Sikukuu ya wakulima Tanzania [ ]
- ii/ Kumbukumbu ya siku ya mapinduzi ya Zanzibar [ ]
- iii/ Uhuru wa Tanganyika [ ]
- iv/ Kumbukumbu ya kifo cha Rais wa kwanza wa Zanzibar Sheikh Abeid Amani Karume [ ]
- v. Kumbukumbu ya kifo cha Rais wa kwanza wa Tanzania Mwalimu Julius Kambarage Nyerere [ ]



CANDIDATE NAME \_\_\_\_\_

NAME OF WARD \_\_\_\_\_

CANDIDATE NUMBER \_\_\_\_\_

NAME OF SCHOOL \_\_\_\_\_

# THE PRESIDENT'S OFFICE

REGIONAL ADMINISTRATION AND LOCAL GOVERNMENT

## KISHAPU DISTRICT COUNCIL

MOCK EXAMINATION FOR STANDARD SEVEN

CIVIC AND MORAL

TIME: 1:30 HOURS

MARCH 2024

### INSTRUCTIONS

1. This paper consists of a total of six questions with section A, B and C
2. Answer all questions in each section.
3. Write your answers in the space provided in each question.
4. Cellular phones, and any unauthorized materials are not allowed in the assessment room.

**SECTION A:****1. Choose the best answer from the given alternatives**

- (i) Amina is aged 12 years. After how long she will be eligible to contest for presidential position?  
 (a) 24 years (b) 6 years (c) 11 years  
 (d) 28 years (e) 20 years [ ]
- (ii) The current chief of the United Republic of Tanzania is Pro. Ibrahim Juma. How he got into power?  
 (a) Elected by citizens of Tanzania (b) Appointed by speaker (c) Appointed by the president  
 (d) Elected by councillors (e) Elected by members of Parliament [ ]
- (iii) The teacher taught ways of motivating the community to support the needy. Which way was not taught?  
 (a) Social media (b) Debate and conference (c) Posters and leaflets  
 (d) Mass media (e) Legal services [ ]
- (iv) You are given the task to explain the importance of supporting the needy. Which one could you mention?  
 (a) Promoting human rights (b) Promote hatred (c) Public meetings  
 (d) Mass media (e) Promote conflicts [ ]
- (v) Tanzania is blessed with different resources. Which at lead to destruction of wate resource?  
 (a) Not releasing sewage water (b) Cutting trees around water sources  
 (c) Not burning forests (d) Fish farmings (e) Protecting water resources [ ]
- (vi) School is the place where pupils get education. The following are important things for development of the school except  
 (a) Food (b) Drinks like soda and beer (c) Facilities  
 (d) Water (e) Electricity [ ]
- (vii) Academic performance of pupils depends on different factors. The document with specific procedures on how to coordinate vorious activities without using force is  
 (a) Objectives (b) Time table (c) Action plan  
 (d) Voluntary donations (e) Voluntary action plan [ ]
- (viii) There various methods of getting funds for development of the school. The planned event of selling and buying goods in a competition form is  
 (a) Auction (b) Market (c) Charity  
 (d) Fundraising (e) Charity dinner [ ]
- (ix) The UN with its headquarters in New york USA declared the Internationsl day of peace  
 (a) 21st sept (b) 1 st May (c) 9th Dec  
 (d) 7th July (e) 24th Oct [ ]
- (x) Nation freedom is the state in which a country our a person is free from foreign domination. Who is responsible to protect national unity and freedom?  
 (a) TPDF only (b) Immigrating department (c) Police force  
 (d) Every citizen (e) Prison force [ ]

2. Match the item with correct answer from LIST B to match LIST A in order to make the meaning sentences by writing its letter to the box provided

LIST A	ANSWER	LIST B
The national symbol which is found at the centre of the president flag	[     ]	A. Court
Is the school leader who deal with academic matters	[     ]	B. The school classroom
The needy group in the community	[     ]	C. Fll council
The thing that does not identify your school	[     ]	D. The school emblem
The organ which is responsible for marking by laws in the district council	[     ]	E. The victims of disasters
		F. Coat of arms
		G. People with disabilities
		H. Head teacher
		I. Academic teacher

3. Choose the correct answer from the given box then answer the space provided

Couple family, Malawi, Recycling, Extended family, 2007, Dr. Congo, 2005, Obeying school rules, Like to be praise

- (i) The fire and rescue operations in Tanzania was formed in \_\_\_\_\_
- (ii) The action of using waste product to form new product is refers to \_\_\_\_\_
- (iii) The founders of East Africa community are Tanzania, Kenya and Uganda. Which country joined the community recently? \_\_\_\_\_
- (iv) John is a pupil who arrives at school very early for everyday. How is this act called? \_\_\_\_\_
- (v) Uncle, Aunt, Grandmother's and my parents are living in one house what type of family is this? \_\_\_\_\_

**SECTION B: (10 marks)****4. Write the correct answer in the black spaces**

(i) Responsibilities are duties or tasks to be performed. Mention any two roles of students government leaders in protecting school environment?

(i) \_\_\_\_\_

(ii) \_\_\_\_\_

(ii) Give out two effects of female genital mutilation

(i) \_\_\_\_\_

(ii) \_\_\_\_\_

(iii) Tax is one of the sources of income in our society. Explain two advantages of paying tax

(i) \_\_\_\_\_

(ii) \_\_\_\_\_

(iv) Corruption is a great enemy of justice in society. Name the effects of giving and receiving corruption

(i) \_\_\_\_\_

(ii) \_\_\_\_\_

(v) Environmental degradation has serious consequences in our community describe two effects of environment degradation

(i) \_\_\_\_\_

(ii) \_\_\_\_\_

**5. Answer the following questions by filling gaps with short answers**

(i) Who is responsible for preparing teachers duty roster at school? \_\_\_\_\_

(ii) A person who is professional in providing special advice the people with different challenges in the society known as? \_\_\_\_\_

(iii) Tanzania currency is made of notes and coins, which animal is found in five hundred coin? \_\_\_\_\_

(iv) The Tanzania institution which is responsible for provision of citizenship is \_\_\_\_\_

**SECTION C: (10 Marks)**

6. Rearrange the following national festivals in correct order by considering the date and monthson how we commemorate by giving them letter A - E

(i) Farmer's Day [ ]

(ii) The Zanzibar Revolution [ ]

(iii) Independence day [ ]

(iv) The death of the first president of Zanzibar, Sheikh Abeid Amani Karume [ ]

(v) The death of the first president of the united Republic of Tanzania, Mwalimu Julius Kambarage Nyerere [ ]

# OFISI YA RAIS

TAWALA ZA MIKOA NA SERIKALI ZA MITAA

HALMASHAURI YA WILAYA YA KISHAPU

MTIHANI WA UTAMILIFU DARASA LA SABA

SAYANSI NA TEKNOLOJIA

Muda: Saa 1:30

MACHI 2024

## MAELEKEZO

- Karatasi hii ina maswali nane yenye sehemu A, B, na C
- Jibu maswali yote katika kila sehemu
- Majibu yote yaandikwe katika nafasi zilizotolewa katika swali
- Andika jina lako na namba ya upimaji katika sehemu ya juu ya karatasi hii
- Simu za mkononi haziruhusiwi katika chumba cha mtihani

**SEHEMU A:**

1. **Chagua jibu sahihi na uandike herufi yake katika kisanduku**
- (i) Umejifunza kuhusu huduma ya kwanza. Je, ni huduma ipi utampa mgonjwa wa kutapika na kuharisha  
 (a) Kumpatia muda wa kutosha na kupumzika (b) Kumpatia protini na vitamini kwa wingi  
 (c) Apewe maji safi yenye mchanganyiko wa chumvi na sukari  
 (d) Alishwe vyakula vya wanga ili kurudisha nguvu mwilini  
 (e) Apelekwe haraka kwenye tiba asili [     ]
- (ii) ARV ni muhimu sana kwa mwathirika wa ugonjwa wa UKIMWI. Je, ipi ni faida ya matumizi ya ARV kati ya hizi zifuatazo? (a) Inabebeka kiurahisi (b) Hutumika sana hospitalini  
 (c) Inaeneza taarifa haraka (d) Kurudisha na kuongeza kinga ya mwili  
 (e) Ni dawa ya chanjo ya ugonjwa wa UKIMWI [     ]
- (iii) Jimmy anatatizo la kutambua vitu vilivyo mbali, alipoenda hospitali Daktari alimshauri atumie miwani. Je, unafikiri ni miwani yenye lenzi gani ambayo Jimmy alishauriwa na daktaria avae?  
 (a) Mbinuko (b) Mbonyeo (c) Kioo bapa  
 (d) Kioo mbinuko (e) Kioo mbonyeo [     ]
- (iv) Mwanafunzi alikuwa anafagia kwa kutumia ufagio wa wima. Alitumia nyenzo daraja la ngapi?  
 (a) Kwanza (b) Pili (c) Tatu  
 (d) Nne (e) Tano [     ]
- (v) Kwa kuzingatia aina za moto unaowaka kifaa kipi huongeza kasi ya moto kuwaka?  
 (a) Petroli (b) Blanketi zito (c) Mchanga  
 (d) Vizima moto (e) Udongo mkavu [     ]
- (vi) Mashine inayonyanyua mzigo wenye uzito wa kilogramu 180 kwa kutumia jitihada na kilogramu 45. Tafuta manufaa ya kimakanika  
 (a) 135 (b) 225 (c) 4  
 (d) 6 (e) 8100 [     ]
- (vii) Ipi sio athariya matumizi mabaya ya simu?  
 (a) Wizi wa mtandaoni (b) Uraibu wa matumizi ya simu (c) Uhalifu  
 (d) Kuelimisha jamii (e) Kuvuruga mila na desturi [     ]
- (viii) Chuma kupata kutu ni badiliko gani la maada?  
 (a) Badiliko la viumbe (b) Badiliko la kiumbo (c) Badiliko la kikanuni  
 (d) Badiliko la vyuma (e) Badiliko ala kikemikali [     ]
- (ix) Mwajuma alisaga juisi kwa kutumia blenda. Je, alitumia aina gani ya mashine?  
 (a) Wenzo (b) Mashine tata (c) Mashine rahisi  
 (d) Mteremko (e) Kabari [     ]
- (x) Yai, lava, buu na mdudu kamili ni hatua za ukuaji wa wadudu wa kundi lipi kati ya haya yafuatayo?  
 (a) Kipepeo, panzi, mbu (b) mbu, mende, kipepeo (c) Kipepeo, panzi, mende  
 (d) Mbu, kipepeo, nzi (e) Nzi, mbu, mende [     ]

2 **Oanisha sentensi za kifungu A na kifungu B ili kuleta maana iliyokusudiwa kwa kuandika herufi ya jibu sahihi kwenye kisanduku ulichopewa**

KIFUNGU A KIFUNGU B Sehemu ya ua iliyo sawa na sehemu ya mfumo wa	
uzazi wa mwanamke huitwa	[ ]A. Kiteuzi
Moyo umegawanyika katika vyumba vinne na kazi yake ni Kusukuma damu kwenda sehemu mbalimbali za mwili. Taja jina la mshipa mkuu wa damu	[ ]B. Daraja la tatu
Madaraja ya moto hutegemeana na vitu vinavyounganisha, ni daraja lipi la moto huzimwa kwa kutumia maji	[ ]C. Aota
Wanafunzi wa darasa la nne walikuwa wamefagia darasa na kisha wachukue koleo na kuzoa uchafu. Je, zoleo la taka ni mashine nyenzo daraja la ngapi?	[ ]D. Ovari
Lipi ni jina sahihi la kifaa kinachotumika kuingizia taarifa kwenye tarakilishi	[ ]E. Moto wa daraja A
	F. Staili
	G. Moto wa daraja B

3. **Kamilisha maswali yafuatayo kwa kuandika jibu sahihi kwenye kisanduku ulichopewa**

Kuzuia kutu, Urethra, Ili mlango uweze kufunga vizuri, Ugwe, Antena kidoa, Naitrojeni, Kuakisi kwa mwanga, Disku ngumu, Kufanya mazoezi ya mara kwa mara, Dira,  $M.K \times 100\%$  Haidrojini salfaidi, Karatasi ya litimasi, Mgonjwa yasisyo tibika kama vile kansa, M.D Difyusheni, Mtandao mama na mtandao janibu, Kuacha kufanya ngono, Kani elezi, Utungisho, Kukojoa

- (i) Sehemu ya mfumo wa kati wa fahamu ambayo imeunganishwa na medulla oblongata ambayo kazi yake ni kusambaza na kurudisha taarifa kutoka sehemu mbalimbali za mwili inaitwaje?  
\_\_\_\_\_
- (ii) Aina ya antena ambayo ni nyepesi na yenye umbo bapa ambayo inauwezo wa kupokea na kuchakata mawimbi ya sumaku umeme kutegemea umbali kati ya kidoa na mkeka unaitwaje?  
\_\_\_\_\_
- (iii) Katika kipindi cha somo la sayansi darasani, mwalimu aliwaeleza wanafunzi kwamba mbolea za NPK, DAP na Urea kutengenezwa na mojawapo ya gesi zinazopatikana hewani. Je unafikiri gesi hiyo ni ipi kati ya zifuatazo \_\_\_\_\_
- (iv) Katika uzalishaji wa gesivunde, gesi moja huondolewa kwa sababu husabaisha mitambo kulika. Je gesi hiyo ni ipi? \_\_\_\_\_
- (v) Ni kifaa kipi hakiwezi kuhifadhi mafaili kwenye tarakilishi? \_\_\_\_\_

4. **SEHEMU B: JIBU MASWALI KWA UFUPI**

- (i) Sehemu ya kiume ya ua ambayo ina chavua na filamentu huitwaje?  
\_\_\_\_\_

- (ii) Tabia gani ya mwanga hujitokeza pale unapopenya kutoka media moja kwenda media nyingine?  
\_\_\_\_\_
- (iii) Ugonjwa wa anemia selimundu upo kwenye kundi gani la magonjwa?  
\_\_\_\_\_

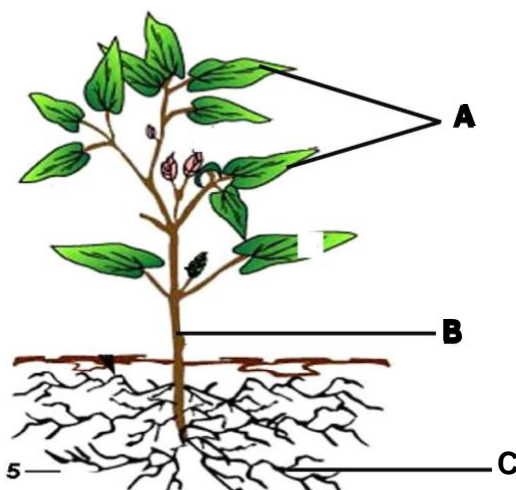
### 5. SEHEMU C: JAZA NAFASI ZILIZOACHWA WAZI

- (i) \_\_\_\_\_ ni kitendo cha kuvuta hewa ndani na kutoa nje ya mwili wa kiumbe hai
- (ii) \_\_\_\_\_ ni mirija myembamba ambayo husafirisha chakula kutoka kwenye jani kwenda sehemu mbalimbali za mmea kwa ajili ya kuhifadhiwa
- (iii) Ni sehemu ipi ya ua inalinda ua changa kabla ya kuchanua? \_\_\_\_\_
- 6(i) \_\_\_\_\_ ni ugonjwa wa mlipuko unaosababisha na mbu aina ya Adesi
- (ii) \_\_\_\_\_ ni kiini cha katikati cha atomi
- (iii) Chembechembe ndogondogo zinazounda Molekyuli ambazo hazigawanyiki kwa urahisi huitwa \_\_\_\_\_
- (iv) Chombo kinachozunguka na kuzalisha nishati ya umeme huitwa \_\_\_\_\_

### SEHEMU D: MICHORO NA UKOKOTOAJI (Alama 5)

- 7(i) Jiwe likiwa hewani lilikuwa na uzito wa 140N. Kama lilirushwa kwenye kimiminika uzito ukawa 80N. Nini kani elezi ya jiwe hilo? \_\_\_\_\_
- (ii) Nini densiti ya kitu chenye uzito wa kilogramu 1000, ikiwa ujazo wake ni  $m^3$  100? \_\_\_\_\_
- (iii) Tafuta mkondo wa umeme katika saketi ya umeme iwapo tofauti ya potenshali ni voltaji 10 na ukinzani wake ni  $2.5\Omega$ . \_\_\_\_\_

### 8. Chunguza kielelezo kifuatacho kisha jibu maswali yanayofuata



### MASWALI

- (i) Nini kazi ya sehemu iliyooneshwa kwa herufi C? \_\_\_\_\_
- (ii) Taja malighafi ambazo zinahitajika katika kitendo kinachofanyika katika sehemu iliyooneshwa kwa herufi A
- (a) \_\_\_\_\_
- (b) \_\_\_\_\_
- (c) \_\_\_\_\_



CANDIDATE NAME \_\_\_\_\_

NAME OF WARD \_\_\_\_\_

CANDIDATE NUMBER \_\_\_\_\_

NAME OF SCHOOL \_\_\_\_\_

# THE PRESIDENT'S OFFICE

REGIONAL ADMINISTRATION AND LOCAL GOVERNMENT

## KISHAPU DISTRICT COUNCIL

MOCK EXAMINATION FOR STANDARD SEVEN

SCIENCE AND TECHNOLOGY

TIME: 1:30 HOURS

MARCH 2024

### INSTRUCTIONS

1. This paper consists of a total of eight questions with section A, B and C
2. Answer all questions in each section.
3. Write your answers in the space provided in each question.
4. Cellular phones, and any unauthorized materials are not allowed in the assessment room.

1. **SECTION A: Choose the correct answer**

- (i) As you have learnt about first aid. How can you help a person with the problem of vomiting and diarrhoea? (a) Giving a patient enough time to rest (b) Providing a victim with plenty of protein and vitamin (c) Providing a victim with a solution with a mixture of salt and sugar (d) Feeding a victim with carbohydrates so as to restore energy (e) Sending a victim for natural medicine immediately [     ]
- (ii) People who are infected with AIDS are advised to take ARVs. Which among the following is the importance of using ARVs to the infected person? (a) ARVs are easy to carry (b) It is mostly used in hospitals (c) It spreads information quickly (d) To restore and strengthen the body immunity (e) Is the vaccine of HIV/ AIDS [     ]
- (iii) Jimmy had a problem of not recognizing things which are far, He went to the hospital and a doctor advised him to wear spectacles with a certain type of lens. What type of lens do you think the doctor advised Jimmy to use? (a) Convex (b) Concave (c) Plane mirror (d) Convex mirror (e) Concave mirror [     ]
- (iv) A standard six-pupiled was seen cleaning the school ground by using a broom. Which class of lever do you think a pupil used? (a) First (b) Second (c) Third (d) Fourth (e) Fifth [     ]
- (v) By considering the classes of fire, which component can increase the fire? (a) Petrol (b) Fire blanket (c) Sand (d) Extinguishers (e) Dry sand [     ]
- (vi) A machine was used to lift a load of 180 kg by using an effort of 45 kg. Find the mechanical advantage of that machine (a) 135 (b) 225 (c) 4 (d) 6 (e) 8100 [     ]
- (vii) Which among the following is not the negative effect of using phones? (a) Online theft (b) Phone addiction (c) Crimes (d) Educating the society (e) Destruction of culture [     ]
- (viii) Rusting of iron is an example of which change of matter? (a) Change of living things (b) Physical change (c) Principle change (d) Iron and metal change (e) Chemical change [     ]
- (ix) Mwajuma used a blender to prepare juice. Which type of machine do you think, Mwajuma used? (a) Lever (b) Complex machine (c) Simple machine (d) Inclined plane (e) Wedge [     ]
- (x) Egg, larva, pupa and imago are growth stages of an insect. Which among the following groups of insects pass through these stages? (a) Butterfly, Grasshopper, Mosquito (b) Mosquito, Cockroach, Butterfly (c) Butterfly, Grasshopper, Cockroach (d) Mosquito, Butterfly, Housefly (e) Housefly, Mosquito, cockroach [     ]

**MATCHING ITEMS LIST A AND LIST B****LIST A****LIST B**

The part of flower that has the same function with the part of female reproductive system is known as

[ ]A. Mouse

Heart is divided into four chambers and its function is to bleed in different parts of the body. What is the name of the large blood vessels?

[ ]B. 3rd class lever

Classes of fire are based on the burning material which class of fire allow water on extinguishing it?

[ ]C. Aorta

Grade four pupils were sweeping their class, after sweeping they take long and carried rabbishes to the pitch. The instrument used to carry rabbishes belongs to which class lever?

[ ]D. Ovary

Computer is divided into two parts among these parts there are different components. What is the name for the computer selection?

[ ]E. Class fire A  
F. Style  
G. Class fire B

3. Complete the following question by choosing the answer from the box below

Nitrogen, Reflecion, hard disk, To do exercise daily, Urination, compass, M.A x 100% Hydrogen sulphed, litmus papers incurable diseases like cancer, Diffusion, V.R local network and wider network, Abstrain from sex, Upthrust, Fertilization.

- (i) The part of the coutral nervers system that is connected to the Medulla Oblongata and its function is to transmit and retrieve information from various parts of the body is called \_\_\_\_\_
- (ii) The types of antenna that is light and flat which has ability to receive and process electogragnetic waves depends on the distance between the patch and ground plane metals is called \_\_\_\_\_
- (iii) During the science lesson the teacher told the class that NPK, DAP and UREA are manufactured from one of the components of air. Which components is it? \_\_\_\_\_
- (iv) In the production of biogas one gas is eliminated to avoid its corrosive property which kind of gas is this \_\_\_\_\_
- (v) Which device does not store computer files? \_\_\_\_\_

4. **SECTION B: Short answers**

- (i) The male part of the flower with anther and filament is called \_\_\_\_\_
- (ii) Which property of light occurs when light passes from one medium to another medium? \_\_\_\_\_
- (iii) Sickle cell anaemia is one among the diseases which belongs to which type of diseases \_\_\_\_\_

CANDIDATE NAME \_\_\_\_\_

NAME OF WARD \_\_\_\_\_

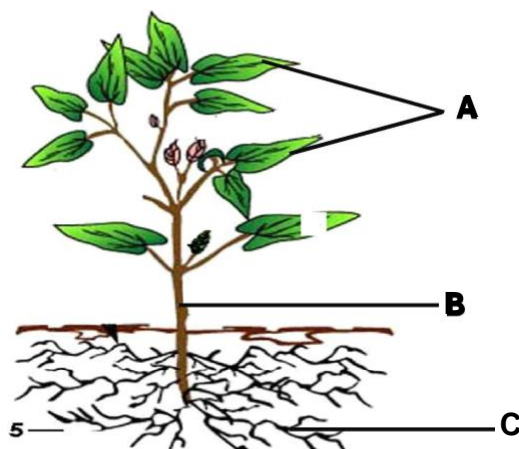
CANDIDATE NUMBER \_\_\_\_\_

NAME OF SCHOOL \_\_\_\_\_

- 5(i) \_\_\_\_\_ is the burning of food substances by oxygen to release, energy in the body of a living thing
- (ii) \_\_\_\_\_ A vessel responsible for transporting food from the leaves to different parts of a plant for use or storage
- (iii) Which part of the flower protects young flower before they become buds \_\_\_\_\_
- 6(i) \_\_\_\_\_ is spread by a female mosquito called Aedes
- (ii) \_\_\_\_\_ is the positively charged central of an atom
- (iii) The smallest particle of a chemical element is called \_\_\_\_\_
- (iv) A device with a coil rotating between magnets to generate electricity is called \_\_\_\_\_

**SECTION C: DIAGRAMS AND CALLULATION (5 MARKS)**

- 7(i) Anna and Mary compute on the following question "When the stone was thrown into the air it weighed 140N. If the stone fell into the liquid its weight become 80N. What is the apparent weight of the stone? \_\_\_\_\_
- (ii) What is the density of an object having a mass 1000kg and volume of 100 cubic meters?  
\_\_\_\_\_
- (iii) Find the electrical current in the electrical circuit if its voltage is 10v and a resistance of 2.5  $\Omega$  \_  
\_\_\_\_\_
8. Carefully study the diagram below the answer the question that follows



- (i) What is the function of part C \_\_\_\_\_
- (ii) Mention raw materials that are need on the process done in the part A
- (a) \_\_\_\_\_
- (b) \_\_\_\_\_
- (c) \_\_\_\_\_

CANDIDATE NAME \_\_\_\_\_

NAME OF WARD \_\_\_\_\_

CANDIDATE NUMBER \_\_\_\_\_

NAME OF SCHOOL \_\_\_\_\_

# THE PRESIDENT'S OFFICE

REGIONAL ADMINISTRATION AND LOCAL GOVERNMENT

## KISHAPU DISTRICT COUNCIL

MOCK EXAMINATION FOR STANDARD SEVEN

SOCIAL STUDIES AND VOCATIONAL SKILLS

TIME: 1:30 HOURS

MARCH 2024

### INSTRUCTIONS

1. This paper consists of a total of seven questions with section A, B and C
2. Answer all questions in each section.
3. Write your answers in the space provided in each question.
4. Cellular phones, and any unauthorized materials are not allowed in the assessment room.

CANDIDATE NAME \_\_\_\_\_

NAME OF WARD \_\_\_\_\_

CANDIDATE NUMBER \_\_\_\_\_

NAME OF SCHOOL \_\_\_\_\_

1 **SECTION A: CHOOSE THE CORRECT ANSWER AND WRITE ITS LETTER**

- (i) Asha lives with her father, mother her two sisters and her aunt, what do we call that kind of family?  
(a) Extended family (b) Nuclear family (c) Adoptive family  
(d) Couple family (e) Single parent family [ ]
- (ii) Global warming is mostly contributed to by human activities. What are those activities among the following  
(a) Fishing and hunting (b) Proper farming and livestock keeping (c) Logging and industrial activities (d) Crops rotation and mixed farming (e) Mining and fishing [ ]
- (iii) Outdated traditions and customs affect our societies negatively. Which among the following is not technique used to abolish such practices. (a) Using mass media (b) Educating the society (c) Enacting and enforce laws  
(d) Arrasting and beating those who practice them (e) Empowering women and girls [ ]
- (iv) Gwamaka lives in the city where the East African community head quator are found. Which city do think Gwamaka lives?  
(a) Kampala - Uganda (b) Nairobi - Kenya (c) Rwanda - Kigali  
(d) South Sudani - Juba (e) Arusha - Tanzania [ ]
- (v) Natural and artificial are the two main categories of resources, Identify the artificial resources among the following?  
(a) Minerals (b) Land (c) Wildlife  
(d) Roads (e) Water [ ]
- (vi) Region such as Dar es salaam, Tanga, Lindi and Mtwara experienced greater temperature than regions of Njombe, Arusha and Mbeya . What causes temperature variation in those regions?  
(a) Latitude (b) Altitude (c) Contour  
(d) Topography (e) Longitude [ ]
- (vii) Improper mining contributes to the destruction of the environment. How can we preserve the environment affected by mining:- (a) Planting trees (b) Reducing the number of livestock (c) Digging holes  
(d) Cutting down trees (e) Burning bushes [ ]
- (viii) Standard six pupils at Songambebe Primary school are planning to have study tour to Kondoa - Irangi n Dodoma. What do you expect them to see there? (a) Remains of the skull of the ancient man  
(b) Remain of early stone age (c) Remnants of the slave trade  
(d) Remain of ancient system of irrigation of agriculture (e) Cave  
drawing and rock painting [ ]
- (ix) Tanzania has had six presidents since the union. Who was the president from 1995-2005?  
(a) Jakaya Mrisho Kikwete (b) Alli Hassani Mwinyi (c) Dr. John Pombe Magufuli  
(d) Benjamini William Mkapa (e) Samia Suluhu Hassani [ ]
- (x) Mbweni village is located along the Indian ocean. What is the most economic opportunity available in that village?  
(a) Lumbering (b) Bee keeping (c) Animal hubandry  
(d) Fishing (e) Agriculture [ ]
- (xi) The pre colonial societies in Tanzania used tradition and customs in educating their children about personal life.  
(a) Taboos (b) Customs (c) Jando  
(d) Initiation (e) Unyago [ ]
- (xii) Mkongwa needs your helps towards the task given to him about explaining the meaning of weather. What elements weather will you mention to him so that he understand the topic?  
(a) Land, water and air (b) Thermometer, barometer and Anemometer (c) Heat, rain and humidity  
(d) Mountains, rivers and valleys (e) Temperature, rainfall and humidity [ ]



CANDIDATE NAME \_\_\_\_\_

NAME OF WARD \_\_\_\_\_

CANDIDATE NUMBER \_\_\_\_\_

NAME OF SCHOOL \_\_\_\_\_

- 4(i) East Africa have been blessed with different lakes. Which is the deepest lake in Africa  
\_\_\_\_\_
- (ii) Sun, planets and all satellites makes \_\_\_\_\_
- (iii) \_\_\_\_\_ Explorers and traders were the main agents of colonialism
- 5(i) A movement of rocks or soil materials following a steep slope is called \_\_\_\_\_
- (ii) The first animals to be domesticated by human being was \_\_\_\_\_
- 6(i) Atmosphere from the earth's surface where by most of human economic activities takes place? \_\_\_\_\_
- (ii) Which type of Iron can be found in three forms of temperature? \_\_\_\_\_

7. **SECTION C: Write short answer**

- (i) Using renewable energy source is one of the ways of reducing environmental degradation pollution. With two examples mention renewable energy sources that can be used instead of firewood and charcoal
- (i) \_\_\_\_\_
- (ii) \_\_\_\_\_
- (ii) Name the weather instrument used to measure air pressure  
\_\_\_\_\_
- (iii) I want to know the level of humidity in Tanzania for 45 yours. Which geographical phenomena am I aiming for  
\_\_\_\_\_
- (iv) Land is one of the important resources that should be taken care of name two (2) ways conserving this important resource
- (i) \_\_\_\_\_
- (ii) \_\_\_\_\_
- (v) Tanzania is a country blessed with many types of minerals. What minerals are available only in Tanzania?  
\_\_\_\_\_



# OFISI YA RAIS

TAWALA ZA MIKOA NA SERIKALI ZA MITAA

HALMASHAURI YA WILAYA YA KISHAPU

MTIHANI WA UTAMILIFU DARASA LA SABA

MAARIFA YA JAMII NA STADI ZA KAZI

Muda: Saa 1:30

MACHI 2024

## MAELEKEZO

- Karatasi hii ina maswali sita yenye sehemu A, B
- Jibu maswali yote katika kila sehemu
- Majibu yote yaandikwe katika nafasi zilizotolewa katika swali
- Andika jina lako na namba ya upimaji katika sehemu ya juu ya karatasi hii
- Simu za mkononi haziruhusiwi katika chumba cha mtihani

- (i) Asha anaishi na baba, mama na wadogo zake, na shangazi familia hii inaitwaje?  
 (a) Familia pana (b) Familia ya kuathiri (c) Familia ndogo  
 (d) Familia ya mke na mume (e) Familia ya mtu mmoaj [ ]
- (ii) Shughuli za Binadamu ndio huchangia ongezeko la joto duniani. Je, shughuli hizo ni zipi?  
 (a) Uvuvi na uwindaji (b) Kilimo sahihi na ufugaji (c) Ukataji miti na shughuli za viwanda  
 (d) Uvuvi na ufugaji (e) Uchimbaji na uvuvi [ ]
- (iii) Mila na Desturi zilizopitwa na wakati ni janga la Taifa. Njia zipi kati ya hizi sio mbinu za kutumia kukomesha hizi mila potofu [ ]  
 (a) Kutumia vyombo vya habari (b) Kuelimisha jamii (c) Kutunga na kutekeleza sheria  
 (d) Kukamata na kuadhibu wanaokiuka sheria (e) Kukeketa kina mama na watoto wa kike
- (iv) Gwamaka anaishi katika mji ambao yapo makao makuu ya jumuiya ya Afrika Mashariki. Je, mji huo ni upi? (a) Kampala - Uganda (b) Nairobi - Kenya (c) Kigali - Rwanda (d) Sudani Kusini - Juba (e) Arusha - Tanzania [ ]
- (v) Rasilimali zinaweza kugawanyika katika aina kuu mbili ambazo ni rasilimali za asili na rasilimali za kutengenezwa na bindamu. Ipi kati iya hizi zifuatazo ni rasilimali za kutengenezwa na binadamu  
 (a) Madini (b) Ardhi (c) Wanyama pori  
 (d) Barabara (e) Maji [ ]
- (vi) Jotoridi ni kubwa katika mkoa wa Dar es Salaam, Tanga, Lindi na Mtwara ikilinganishwa na mikoa ya Njombe, Arusha na Mbeya, kipi kinasababisha kuwepo kwa tofauti ya jotoridi katika mikoa hiyo?  
 (a) Latitudo (b) Mwinuko (c) Kontua  
 (d) Sura ya nchi (e) Longitudo [ ]
- (vii) Uchimbaji wa madini ni miongoni mwa shughuli zinazochangia katika uharibifu wa mazingira. Je, ni kwa namna gani tunaweza kuimarisha mazingira ya eneo lililoathiriwa na shughuli za uchimbaji wa madini?  
 (a) Upandaji miti (b) Kupunguza idadi ya wanyama (c) Kuchimba mashimo  
 (d) Kukata miti ovyo (e) Uchomaji wa misitu [ ]
- (viii) Wanafunzi wa darasa la sita katika shule ya msingi Songambe wanapanga kufanya ziara ya masomo kwenda Kondo - Irangi Dodoma. Je, wanafunzi hao wanataka kwenda kuona nini katika eneo hilo? (a) Mabaki ya fuvu la mtu wa kale zaidi (b) Mabaki ya zana za mawe za mwanzo  
 (c) Mabaki ya biashara ya utumwa (d) Mabaki ya mifumo ya kale ya kilimo cha umwagiliaji  
 (e) Michoro ya mapangoni [ ]
- (ix) Tanzania imeongozwa na Marais sita tangu Muungano. Je yupi kati ya wafuatao ni Rais aliyeongoza Tanzania kuanzia mwaka 1995 - 2005  
 (a) Jakaya Mrisho Kikwete (b) Alli Hassani Mwinyi (c) Dr. John Pombe Magufuli  
 (d) Benjamini Mkapa (e) Samia Suluhu Hassani [ ]
- (x) Kijiji cha Mbweni kipo pembezoni mwa bahari ya Hindi. Je, ni fursa ipi ya kiuchumi inayopatikana katika kijiji hicho  
 (a) Upasuaji wa mbao (b) Ufugaji wa nyuki (c) Ufugaji  
 (d) Uvuvi (e) Kilimo [ ]
- (xi) Jamii za kale za Tanzania zilitumia mafunzo ya kimila katika kufunda watoto wao kuelekea utu uzima. Je, mafunzo hayo yaliyokuwa yanatolewa kwa wanawake yaliitwaje?

(a) Miiko  
(d) Kanuni(b) Desturi  
(e) Unyago

(c) Jando

[     ]

(xii) Mkongwa anahitaji msaada wako kuhusu kazi aliyopewa shuleni ambayo inamtaka aeleze maana ya hali ya hewa. Je, utamtajia vipengele gani vya hali ya hewa ili aweze kuelewa vizuri maada hiyo

(a) Ardhi, maji, hewa (b) Themomita, Baromita, Anemomita (c) Jotoridi, mvua, unyevu  
(d) Milima, mito, mabonde (e) Jotoridi, mvua, unyevuanga [     ]

(xiii) Jotoridi linapungua kadri mwinuko unavyoongezeka kutoka usawa wa bahari. Je, jotoridi unapungua nyuzi ngapi endapo utasafiri mita 1000 kutoka usawa wa bahari

(a) 0.6°C (b) 6°C (c) 600°C  
(d) 60°C (r) 0.06°C [     ]

(xiv) Engaruka, Kondoa Irangi, Bagamoyo na bonde la Olduvai ni maeneo maarufu nchini Tanzania. Je, maeneo hayo kwa pamoja yanaitwaje?

(a) Maeneo ya historia (b) Makumbusho ya Taifa (c) Kumbukumbu  
(d) Vituo vya utamaduni (e) Hifadhi ya Taifa [     ]

(xv) Mabadiliko ya Tabia nchi ni tatizo la dunia ipi ni mbinu bora ya kukabiliana na mabadiliko ya tabia nchi iliyopo hivi sasa kati ya hizi?

(a) Ukataji miti (b) Uchomaji wa mafuta (c) Kupanda miti  
(d) Kujenga viwanda vingi (e) Ongezeko la watu [     ]

2. Oanisha maneno katika fungu A na B kisha andika herufi ya jibu sahihi kwenye nafasi uliyopewa

	<u>FUNGU A</u>	<u>JIBU</u>	<u>FUNGU B</u>
i.	Mji wa kwanza Arika Mashariki kutengeneza na kutumia fedha yake ulikuwa ni	[i.____]	A. Dakika 15
ii.	Historia ya Pwani ya Afrika Mashariki iliandikwa na	[ii____]	B. Dakika 4
iii.	Mreno wa kwanza kufika Pwani ya Afrika mashariki	[iii____]	C. Batholomeo Diaz
iv.	Dunia hutumia muda wa dakika ____ Kujizungusha kati ya longitudo moja hadi nyingine	[iv.____]	D. Vasco da Gama
v.	Mfumo wa vyama vingi ulianzishwa Tanzania kwa mara ya pili mwaka	[v.____]	E. 1992 F. 1995 G. Kilwa H. Karl Peter I. Ibn Batuta J. 1985

**SEHEMU B: (ALAMA 20)****3. Jaza nafasi zilizoachwa wazi kwa kuandika jibu sahihi kwenye nafasi uliyopewa (swali la 3 - 6)**

i. Ikiwa mwezi unakaa kati ya dunia na jua, huonyesha kupatwa kwa \_\_\_\_\_

ii. Mkutano wa Berlin ulifanyika Ujerumani kati ya mwaka \_\_\_\_\_ hadi \_\_\_\_\_

iii. Baada ya tukio lipi Wajerumani walitawala Tanganyika? \_\_\_\_\_

4.

i. Afrika Mashariki ina maziwa mengi. Ni ziwa lipi lina kina kirefu zaidi barani Afrika?  
\_\_\_\_\_

ii. Jua, sayari na satelaiti zote kwa pamoja huunda? \_\_\_\_\_

iii. \_\_\_\_\_ wapelelezi na wafanyabiashara walikuwa vitangulizi vya ukoloni

5i. Mmeguko wa ardhi kufuata mteremko mkali huitwa \_\_\_\_\_

ii. Mnyama wa kwanza kufugwa na binadamu alikuwa \_\_\_\_\_

6i. Tabaka la chini la angahewa kutoka kwenye uso wa dunia ambako shughuli nyingi za kiuchumi hufanyika huitwa \_\_\_\_\_

ii. Ni aina ipi ya pasi ambayo joto lake hurekebishwa katika mifumo mitatu?

**7. SEHEMU C: Jaza maswali yafuatayo kwa kuzingatia maelezo ya kila kipengele na uandike jibu katikanafasi uliyopewa**

(i) Kutumia nishati mbadala ni miongoni mwa njia zinazosaidia kupunguza uchafuzi wa mazingira. Elezea mifano miwili ya nishati mbadala ambazo zinaweza kutumika badala ya kuni na mkaa

(i) \_\_\_\_\_

(ii) \_\_\_\_\_

(ii) Ni kwa namna gani rushwa inaweza kuwa chanzo cha kudhoofisha maendeleo? Taja hoja mbili

(i) \_\_\_\_\_

(ii) \_\_\_\_\_

(iii) Nataka kujua kiwango cha unyevuanga cha nchi yangu Tanzania kwa miaka 45. Je, unadhani ninalenga kujua dalili ipi ya kijiografia  
\_\_\_\_\_

(vi) Ardhi ni miongoni mwa rasilimali muhimu zinazopaswa kutunzwa. Taja njia mbili (2) za utunzaji wa rasilimali hii muhimu \_\_\_\_\_

V) Tanzania ni nchi iliyobarikiwa kuwa na aina nyingi za madini. Je, ni madini yapi yanapatikana nchini Tanzania pekee?  
\_\_\_\_\_

# OFISI YA RAIS

TAWALA ZA MIKOA NA SERIKALI ZA MITAA

HALMASHAURI YA WILAYA YA KISHAPU

MTIHANI WA UTAMILIFU DARASA LA SABA

HISABATI

Muda: Saa 2:00

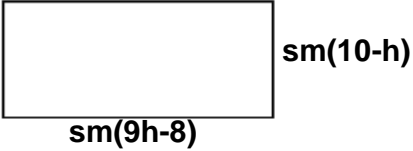
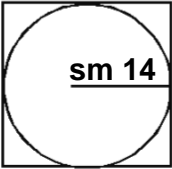
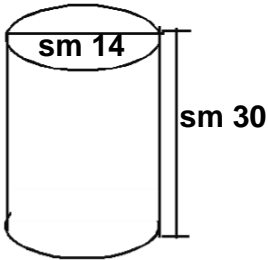
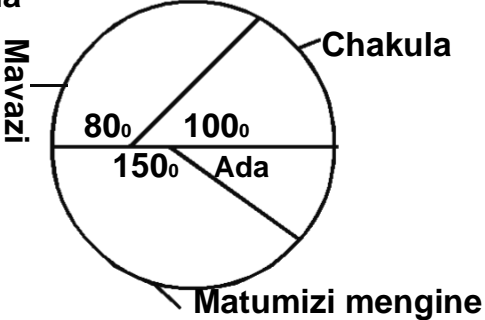
MACHI 2024

## MAELEKEZO

- Karatasi hii ina maswali saba yenye sehemu A, B, na C
- Jibu maswali yote katika kila sehemu
- Majibu yote yaandikwe katika nafasi zilizotolewa katika swali
- Andika jina lako na namba ya upimaji katika sehemu ya juu ya karatasi hii
- Simu za mkononi haziruhusiwi katika chumba cha mtihani

Na.	Swali	Sehemu ya kazi	Jibu
1. (i)	<b>SEHEMU A: Kokotoa maswali yafuatayo (Alama 10)</b> $59 + 3,772 + 255 =$		
(ii)	$80,709 - 5,987 =$		
(iii)	$40050 \times 30 =$		
(iv)	$67435 \div 90$		
(v)	$3\frac{3}{5} + 1\frac{2}{3} =$		
(vi)	$30 - 18\frac{3}{17}$		
(vii)	$\frac{1}{3} \times 72 =$		
(viii)	$9\frac{1}{4} \div 3\frac{1}{3} =$		
(ix)	$6.619 + 15.69 =$		
(x)	$70.025 - 20.996 =$		
2.	<b><u>SEHEMU B: MAFUMBO</u></b> <b><u>SOMA KWA MAKINI KISHA FUMBUA</u></b>		
(i)	Katika namba hii 63127 ni tarakimu ipi thamani yake ni ndogo zaidi		
(ii)	Andika kwa tarakimu “Milioni mia mbili thelathini na saba, mia sita hamsini elfu, mia tisa ishirini		
(iii)	Andika nafasi ya thamani ya tarakimu iliyopigiwa mstari kwenye namba 114 <u>3</u> 578		
(iv)	Andika kwa kifupi $50,000,000 + 5,000,000 + 500,000 + 0 + 1000 + 100 + 0 + 6$		
(v)	Kadiria namba hii 4.0795 katika nafasi mbili za desimali		
(vi)	Kadiria namba hii 8956701 katika mamia elfu yaliyo karibu		
3.	<b><u>ALAMA 2 KILA KIPENGELE</u></b>		
(i)	Peter ana 10.71 ya machungwa na Juma ana 218.67. Tafuta hisa ya machungwa ya Juma na Peter		

Na.	Swali	Sehemu ya kazi	Jibu
(ii)	Tafuta zao la 29.24 na 29		
(iii)	Tafuta thamani ya $-1(-5)+(-8) =$		
4.	<b><u>ALAMA 2 KILA KIPENGELE</u></b>		
(i)	Badili $3\frac{1}{5}\%$ kuwa sehemu		
(ii)	Badili 0.45% kuwa desimali		
(iii)	Tafuta namba inayofuata katika mtiririko ufuatao 1, 4, 9, 16, 25, _____		
5	<b><u>ALAMA 2 KILA KIPENGELE</u></b>		
(i)	Tafuta kigawe kidogo cha shirika (K.D.S) cha 18, 29 na 30		
(ii)	Tafuta kigawo kikubwa cha shirika (K.K.S) cha 24, 48 na 96		
(iii)	Tafuta kipeuo cha pili cha 2401		
6	<b><u>ALAMA 2 KILA KIPENGELE</u></b>		
(i)	Magufuli alifariki akiwa na miaka 95, kama alizaliwa mwaka 1918. Je, alifariki mwaka gani kwa namba za kirumi?		
(ii)	Tafuta kianzio ikiwa faida inayopatikana kwa mwaka mmoja ni shs 15000 na kiasi cha riba kwa mwaka ni 5%		
(iii)	Ni namba tasa ipi ukitoa na namba shufwa jibu ni sifuri?		

Na.	Swali	Sehemu ya kazi	Jibu
7.	<p><b><u>SEHEMU C: MAUMBO NA TAKWIMU ALAMA 10</u></b>                      Kokotoa maumbo yafuatayo kila kipengele alama 2</p> <p>(i) Tafuta eneo la mstatili lifuatalo sm10</p> 		
(ii)	<p>Tafuta eneo lililotiwa kivuli iwapo duara lililochorwa ndani ya mraba lina nusu kipenyo cha sm 14 tumia pai <math>\frac{22}{7}</math></p> 		
(iii)	<p>Tafuta ujazo wa umbo lifuatalo (Tumia <math>\pi = \frac{22}{7}</math>)</p> 		
8.	<p><b><u>TAKWIMU KILA KIPENGELE ALAMA 2</u></b></p> <p>(i) Peo nne za msambamba ni kama ifuatavyo A(-3,1), B(-3,-2), C(4,1), D(m,-2). Tafuta thamani ya m</p>		
(ii)	<p>Madam Mahimbo hupata mshahara wa shilingi 1,200,000 kwa mwezi na kufanya matumizi yake kama ilivyooneshwa kwenye grafu kwa duara ifuatayo. Tafuta matumizi ya ada katika asilimia</p> 		



CANDIDATE NAME \_\_\_\_\_

NAME OF WARD \_\_\_\_\_

CANDIDATE NUMBER \_\_\_\_\_

NAME OF SCHOOL \_\_\_\_\_

# THE PRESIDENT'S OFFICE

REGIONAL ADMINISTRATION AND LOCAL GOVERNMENT

## KISHAPU DISTRICT COUNCIL

MOCK EXAMINATION FOR STANDARD SEVEN

ENGLISH LANGUAGE

TIME: 1:30 HOURS

MARCH 2024

### INSTRUCTIONS

1. This paper consists of a total of seven questions with section A, B and C
2. Answer all questions in each section.
3. Write your answers in the space provided in each question.
4. Cellular phones, and any unauthorized materials are not allowed in the assessment room.

**SECTION A:**

1. **Listen attentively to the passage read by the invigilator and then answer the questions that follow by choosing the letter of the correct answer in the space provided**
- (i) Who is a narrator of the passage?  
 (a) Muhogo (b) Masanja (c) Jongo  
 (d) Masanja and Jongo (e) Juakali [ ]
- (ii) \_\_\_\_ advised others to study hard?  
 (a) Juakali (b) Jongo (c) Muhogo  
 (d) Masanja (e) Muhogo and Masanja [ ]
- (iii) Why studying hard is necessary?  
 (a) In order to perform well (b) To win our games (c) To avoid mistakes  
 (d) To be generous (e) To our examinations [ ]
- (iv) The best student shown in the passage is  
 (a) Masanja (b) Muhogo (c) Jongo  
 (d) Jangala (e) Muhogo and Jongo [ ]
- (v) Which is the best title of the passage?  
 (a) Studying hard is important (b) Working hard is important (c) Studying is necessary  
 (d) We need to work hard (e) We need to perform well in our final examination [ ]
2. **Choose the correct words that complete the sentences by writing the letter of the correct answer in the spaces provided**
- (i) Eagle did not want to live a miserable life \_\_\_\_ he started working in the farm  
 (a) so (b) but (c) or  
 (d) for (e) and [ ]
- (ii) We have an examination tomorrow \_\_\_\_ we must study hard tonight  
 (a) Or (b) Because (c) But  
 (d) for (e) so [ ]
- (iii) In this world you can be a queen \_\_\_\_ a king but you can't be free  
 (a) Yet (b) so (c) For  
 (d) or (e) nor [ ]
- (iv) Kagomba Sports club did not play well \_\_\_\_ they scored a goal  
 (a) That (b) Because (c) For  
 (d) or (e) Yet [ ]
- (v) Tanzania is a peaceful country and its citizens are \_\_\_\_ intelligent than neighbouring countries  
 (a) Most (b) More (c) Some  
 (d) Very (e) Both [ ]

3. **Complete the following sentences by choosing the words from the box below(i-v)**

From, Any, Since, and, that, Some, but
--

- (i) Sheila is so rich \_\_\_\_\_ she can buy this car
- (ii) Juma is suffering \_\_\_\_\_ skin cancer
- (iii) I have been living here \_\_\_\_\_ 2015
- (iv) Do you have \_\_\_\_\_ book in your bag?
- (v) Abraham is fond of sports. He can play both football \_\_\_\_\_ basketball very well

4. **Match the items from column A to its corresponding response from column B and write its letter in the space provided**

COLUMN A	ANSWER	COLUMN B
The synonym of the word buy	[     ]	A. Journalist
Is an example of a verb	[     ]	B. Breakfast
A person who writes a newspaper	[     ]	C. Depart
The antonym of the word arrive	[     ]	D. Teacher
Compound word	[     ]	E. Purchase
		F. Saw
		G. Slowly

**SECTION B: COMPOSITION**

5. **This section has five mixed sentences. Arrange the sentence so as to make a good composition by giving them letters A to E**

(i) He sat on his bed and utter prayers [ ]

(ii) It was still dark [ ]

(iii) He got up and turned on the light [ ]

(iv) Yesterday John woke up at five o'clock [ ]

(v) He got prepared and went to school [ ]

**SECTION C: (20 Marks)**

6. **Fill in the following gaps (i - v)**

(i) This is Asha's dress. It is \_\_\_\_\_

(ii) The doctor \_\_\_\_\_ treated my mother has come

(iii) They went to the market yesterday \_\_\_\_\_ ?

(iv) John washes his clothes. Change into passive voice \_\_\_\_\_

(v) "The teacher are advising us," the pupils said. Change into reported speech \_\_\_\_\_

**COMPREHENSION**

7. **Read the passage below and answer the questions that follows**

Mzee Ally is 70 - years - old. He is married to mama Khadija they live happily with their grandsons Magoma and Kazi Mzee Ally and his wife have two children, Ashura and Juma. They both live in Kagera. Ashura is Abdallas wife and Magoma is their son. Abdallah is Mariam's husband and Kazi is their only son.

**QUESTIONS**

(i) How many children does Mzee Ally have?

(ii) How many grandchildren does mzee Ally have?

(iii) Abdallah calls mzee Ally

(iv) Mariam calls Mama Khadija

(v) How does Kazi calls Magoma

CANDIDATE NAME \_\_\_\_\_

NAME OF WARD \_\_\_\_\_

CANDIDATE NUMBER \_\_\_\_\_

NAME OF SCHOOL \_\_\_\_\_

# THE PRESIDENT'S OFFICE

REGIONAL ADMINISTRATION AND LOCAL GOVERNMENT

## KISHAPU DISTRICT COUNCIL

MOCK EXAMINATION FOR STANDARD SEVEN

### MATHEMATICS

TIME: 2:00 HOURS

MARCH 2024

#### INSTRUCTIONS

1. This paper consists of a total of seven questions with section A, B and C
2. Answer all questions in each section.
3. Write your answers in the space provided in each question.
4. Cellular phones, and any unauthorized materials are not allowed in the assessment room.

No.	Question	Work Space	Answer
1.	<b>SECTION A: (10 Marks)</b> Calculate the following questions (i - x)		
(i)	$59 + 3,772 + 255 =$		
(ii)	$80,709 - 5,987 =$		
(iii)	$40050 \times 30 =$		
(iv)	$67435 \div 90$		
(v)	$3^{3/5} + 1^{2/3} =$		
(vi)	$30 - 18^{3/17}$		
(vii)	$1/3 \times 72 =$		
(viii)	$9^{1/4} \div 3^{1/3} =$		
(ix)	$6.619 + 15.69 =$		
(x)	$70.025 - 20.996 =$		
2.	<b><u>SECTION B: WORD PROBLEM</u></b> Read the following questions carefully and then solve word problem from Question 2 - 6(30 marks)		
(i)	Which digit in the number has the smallest total value in 63127?		
(ii)	Write two hundred thirty seven million six hundred fifty thousand nine hundred and twenty in numerals		
(iii)	Write the place value of the underlined digit in 11 <u>4</u> 3578		
(iv)	Write $50,000,000 + 5,000,000 + 500,000 + 0 + 1000 + 100 + 0 + 6$ in standard form		
(v)	Approximate 4.0795 to two decimal places		
(vi)	Approximate 8956701 to the nearest hundred thousand		
3.	<b><u>EACH ITEM ONE MARK (i - iii)</u></b>		
(i)	Peter has 10.71 of oranges and Juma has 218.67. What is the quotient of oranges of Juma and Peter?		

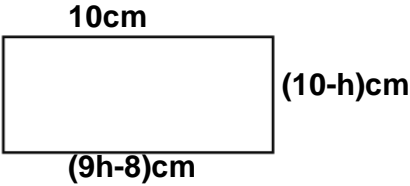
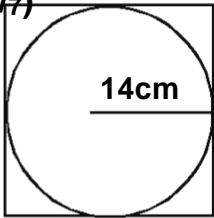
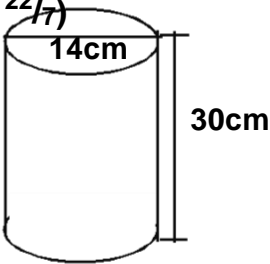
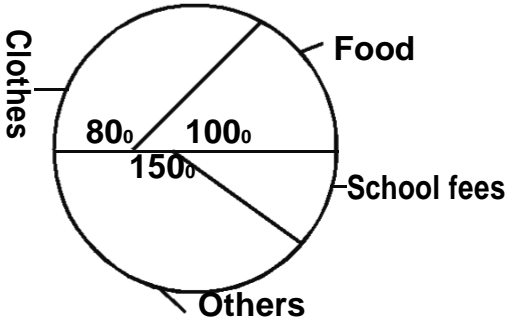
CANDIDATE NAME \_\_\_\_\_

NAME OF WARD \_\_\_\_\_

CANDIDATE NUMBER \_\_\_\_\_

NAME OF SCHOOL \_\_\_\_\_

No.	Question	Work	Answer
(ii)	Find the product of 29.24 and 29		
(iii)	Find the value of $-1(-5)+(-8) =$		
4.	<b><u>EACH ITEM 2 MARKS (i - iii)</u></b>		
(i)	Change $3\frac{1}{5}\%$ into a fraction		
(ii)	Convert 0.45% into a decimal		
(iii)	Find the next number in the following sequence 1, 4, 9, 16, 25, _____		
5	<b><u>EACH ITEM 2 MARKS (i - iii)</u></b>		
(i)	Find the least common Multiple (L.C.M) of the following number 18, 24 and 30		
(ii)	Find the Highest common factor (H. C. F) 24, 48 na 96		
(iii)	Find the square root of 2401		
6	<b><u>EACH ITEM 2 MARKS (i - iii)</u></b>		
(i)	Magufuli died at the age of 95 years, if he was born 1918, in which year did he die in Roman number?		
(ii)	Find the principle amount which gives an Interest of shs 15000 after 1 year with an interest rate of 5% per annum.		
(iii)	What prime number when you subtract by even number the answer is zero		

No.	Question	Work	Answer
7.	<p><b><u>SECTION C: FIGURES AND STATISTICS</u></b>  <b><u>(10 Marks)</u></b></p> <p>Calculate the following figures each item 2 marks</p> <p>(i) Find the area of the following rectangle</p> <div style="text-align: center;">  </div>		
(ii)	<p>Find the area of the shaded part in the figure below (<math>\pi = \frac{22}{7}</math>)</p> <div style="text-align: center;">  </div>		
(iii)	<p>Find the volume of the cylinder below (use <math>\pi = \frac{22}{7}</math>)</p> <div style="text-align: center;">  </div>		
(i)	<p><b><u>STATISTICS 2 MARKS EACH ITEMS</u></b></p> <p>The four co-ordinates of a parallelogram are A(-3,1), B(-3,-2), C(4,1), D(m,-2). Find the value of "m"</p>		
(ii)	<p>Madam Mahimbo receives a salary of 1,200,000 per month. And spend it as own in the following pie chart. What the percentage used in school fees?</p> <div style="text-align: center;">  </div>		