

MASTERFUL EDUCATIONAL SERVICES PLATFORM (MESP - TANZANIA)



CONTACT: 0715 966 222

E-mail: mesptanzania@gmail.com

LOCATION: KIBAHA-MAILIMOJA

STANDARD SEVEN SERIES ASSESSMENT

CIVIC AND MORAL EDUCATION (06E)

TIME: 1:30 HOUR

MARCH 2024

SECTION A (20 MARKS)

1. Choose the correct answer and write its corresponding letter in the box provided

- (i) Which of the following does not identify a nation?
 - (a) Coat of arms
 - (b) School emblem
 - (c) National culture
 - (d) National constitution
 - (e) National animal
- (ii) One of the agencies for protecting and advocating for human rights in Tanzania is the commission for human rights and good governance. When was this agency established?
 - (a) 2007
 - (b) 1995
 - (c) 2019
 - (d) 2001
 - (e) 1996
- (iii) The child law No 13 of 2009 and its amendment of 2014 stipulates the rights and responsibilities of a child. Which one is among the responsibilities stipulated in the law?
 - (a) Respecting parents and guardians
 - (b) Being involved in decision making
 - (c) Playing for fun
 - (d) Being awarded when they pass their exams
 - (e) Electing prefects
- (iv) Which strategy among the following helps pupils to be confident and daring to handle cross-cutting issues in the society?
 - (a) Punishing them severely
 - (b) Equipping them with all learning facilities
 - (c) Giving them guidance and counseling services
 - (d) Enrolling them in boarding schools
 - (e) Establishing remedial programs
- (v) Which one of the following is the good way through which one can promote his or her country internationally?
 - (a) By participating in sports and games
 - (b) By participating poaching
 - (c) By evading taxes
 - (d) By involving human trafficking
 - (e) By involving in drug trafficking
- (vi) The persistence of corruption in Tanzania is a challenge facing both governmental and non-governmental organizations. What do you think is the cause root of this dishonest act?
 - (a) People believe that corruption is good
 - (b) Corruption embraces patriotism
 - (c) People want to fast development
 - (d) Tanzanians are kind
 - (e) People lack morals and integrity

- (vii) Joan and her husband John live at Manga village. They are not yet blessed with a child. What kind of family is that?
- (a) Single parent family (c) Couple family (e) Extended family
- (b) Nuclear family (d) Child-headed family
- (viii) Which national symbols are used together to identify the airplanes owned by the government of the United Republic of Tanzania?
- (a) National animal and national emblem (d) National emblem and national anthem
- (b) National constitution and national flag (e) National flag and national animal
- (c) National anthem and Uhuru torch
- (ix) The leaders of the parliament of Tanzania who is appointed by the president and being approved by the parliament to lead the government day to day activities in the parliament is
- (a) President (c) The speaker (e) The minister for internal affairs
- (b) Chief justice (d) The prime minister
- (x) A set of laws and basic principles that govern the activities of a country is called constitution. In which year was the current constitution of Tanzania written?
- (a) 1961 (b) 1962 (c) 1964 (d) 1965 (e) 1977

2. Match items in List A with corresponding answers from List B

LIST A	ANS	LIST B
(i) TANAPA		A. Chairs district advisory committee
(ii) Fire and Rescue Force		B. Protects and develop wildlife in Tanzania
(iii) District commissioner		C. Coordinates firefighting and rescue operations
(iv) Approves government budget		D. Executive
(v) Executes laws		E. Parliament

3. Fill in the gaps with the correct word from the bracket

- (i) There are two parts of Tanzania parliament. Which part has a constitutional power and authority to launch and dissolve the parliament?
 _____ (National assembly, President)
- (ii) How many chapters does the current constitution of Tanzania have?
 _____ (Ten, Five)
- (iii) I am a component of coat of arms. I represent fertile soil of Tanzania. Who am I? _____ (yellow portion, red portion)
- (iv) The body responsible for collection of tax in Tanzania is called _____ (PCCB, TRA)
- (v) The court that handles both cases from Zanzibar and Tanzania mainland is _____ (high court, court of appeal)

SECTION B (10 MARKS)

4. The following sentences outline steps for implementing goals. Rearrange them in chronological order from the first one to the last by giving them letters A, B, C, D and E

- (i) Identify basic requirements
- (ii) Setting priorities
- (iii) Identifying important activities to do
- (iv) Doing an evaluation
- (v) Selecting strategies of implementing

5. Write the correct answers in the space provided

- (i) Identify two techniques you would use to educate the youths about reproductive health education
 - (a) _____
 - (b) _____
- (ii) Mention two acts violates children's rights in the society
 - (a) _____
 - (b) _____
- (iii) Write two acts that help you to avoid risky behavior in the community
 - (a) _____
 - (b) _____
- (iv) Which country joined the East African Community (EAC) in 2016?

- (v) Give two reasons to why did Democratic Republic of Congo (DRC) join the Eat African Community
 - (a) _____
 - _____
 - (b) _____
 - _____

SECTION C (10 MARKS)

6. Study the picture of the national symbol below and answer items (i) – (v)



- (i) Name the national symbol above _____

(ii) What does it represent?

(iii) Who designed this national symbol?

(iv) Where can it be seen?

(v) Which component of this national symbol stands for national defense?

MASTERFUL EDUCATIONAL SERVICES PLATFORM (MESP - TANZANIA)



CONTACT: 0715 966 222

E-mail: mesptanzania@gmail.com

LOCATION: KIBAHA-MAILIMOJA

STANDARD SEVEN SERIES ASSESSMENT SOCIAL STUDIES AND VOCATIONAL SKILLS (03E)

TIME: 1:30 HOUR

MARCH 2024

SECTION A (20 MARKS)

1. For items (i) – (xv), choose the letter of the correct answer and write it in the box provided
- (i) Social studies teacher taught his pupils about the acts that cause land degradation. Which act do you think was not among those the teacher taught his pupils?
- (a) Using of chemical fertilizers (c) Monocropping (e) Intercropping
- (b) Cutting down trees (d) Nomadic herding
- (ii) Tanzania is endowed with different types of minerals. In which region is the mineral used as food ingredients found in plenty?
- (a) Ruvuma (b) Simiyu (c) Manyara (d) Kigoma (e) Geita
- (iii) The increased levels of greenhouse gases in the atmosphere have contributed much to the rapid increase of global warming. Which one of the following is a not gas that is talked about?
- (a) Nitrous oxide gas (c) Methane gas (e) Oxygen gas
- (b) Carbon dioxide gas (d) Hydro chlorofluorocarbons (HCFCs)
- (iv) Which national park under TANAPA that is found in Njombe region was primarily established in 2005 to protect its flora and it is locally nicknamed as “The Garden of God”?
- (a) Kituro (b) Kidepo (c) Gombe (d) Selous (e) Mkomazi
- (v) Standard five pupils were discussing about the two types of wastes. Under which type of wastes do pieces of glass, iron, tins, iron sheets, plastic utensils, needles and razor blades fall?
- (a) Hard wastes (c) Decomposed wastes (e) Un-decomposed wastes
- (b) Complex wastes (d) Simple wastes

- (vi) It is important to know the climate of a particular area because it shows long-term trends in the elements of weather. Which element of weather is determined by cup anemometer?
- (a) Rainfall (c) Wind intensity (e) Wind direction
(b) Temperature (d) Air Pressure
- (vii) On 6th February 2023, a Mw 7.8 earthquake struck Southern and Central Turkey as well as Northern and Western Syria at 0417hours. Which instrument was used to determine this magnitude?
- (a) Seismometer (c) Seismograph (e) Stethoscope
(b) Richter scale (d) Magnitude Scale
- (viii) Socks are an important garment worn on the feet together with shoes. Why cotton socks the best?
- (a) Because they are worn as uniform (d) Because they are worn in various places
(b) Because they are worn with casual clothing (e) Because they are made of fabrics
(c) Because they allow sweat from the feet to be absorbed
- (ix) When volcano erupts, it causes both negative and positive effects to human beings. Some of the positive effects of volcanic eruptions to human beings include the following except:
- (a) Landslides and earthquakes (c) Formation of islands
(e) Fertile soil (d) Formation of springs
- (x) Which layer of the atmosphere acts like a blanket that protects the earth from being hit by asteroids and other heavenly bodies?
- (a) Thermosphere (b) Mesosphere (c) Stratosphere (d) Troposphere (e) Exosphere
- (xi) The first animal to be domesticated by man was dog. When did man start domestication of animals?
- (a) During Old Stone Age (c) During Late stone Age (e) During Iron Age
(b) During Middle Stone Age (d) During Digital Technological Age
- (xii) When he visited his grandma in the village, Maduhu slept in the dirty room full of rats and fleas. Which disease was Maduhu likely to suffer from among the following?
- (a) Malaria (b) Diarrhea (c) Plague (d) Bilhazia (e) Cholera
- (xiii) Kishimba is a chef. He always wears a special garment that protects him from getting dirty while working. How is this garment called?
- (a) Dandruff (b) Face mask (c) Salon (d) Apron (e) Water closet
- (xiv) Improper fishing is the major factor that disturbs aquatic life. Which one is not associated with the improper fishing in Tanzania?
- (a) Harpooning (b) Dynamite (c) Drift nets (d) Poisons (e) Loans
- (xv) Bonbea taught his pupils characteristics of various components of solar system. Which component of solar system completes its revolution around the sun in 88 days?
- (a) Mercury (b) Asteroid (c) Venus (d) Pluto (e) Moon

2. Match items in List A with corresponding others from List B

LIST A	ANS	LIST B
(i) Margin		A. 3 rd January every year

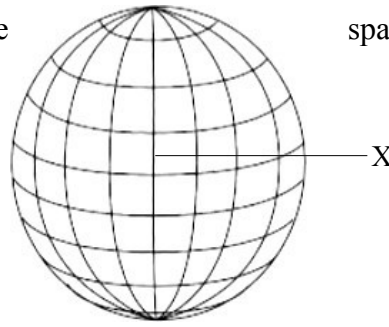
(ii)	Aphelion		B. The coldest season of the year
(iii)	Winter		C. Shows the boundary of the area shown on a map
(iv)	Laetoli		D. Independence of Zanzibar
(v)	10 th December 1963		E. Hominina footprints

SECTION B (20 MARKS)

3. (a) Briefly explain two main objectives of the Southern African Development Community (SADC)
- (i) _____
- (ii) _____
- (b) Why was production low under communal mode of production?
- _____
- (c) In 1964, Nelson Mandela was sentenced to life imprisonment by Boers government. What was the reason for that sentence?
- _____
4. (a) Identify two criteria used to classify entrepreneur into various groups
- (i) _____
- (ii) _____
- (b) Describe two methods used to conserve land resource in the village
- (i) _____
- (ii) _____
- (c) Identify two diseases which are caused by water contamination from industries and homes
- (i) _____
- (ii) _____
5. (a) Though has been a great cause of environmental destruction, firewood has been a major a source of energy for a number of years in rural areas. Suggest a way of preventing this act _____
- (b) Identify two objectives that led to Tanzania to join East African Community in 2000
- (i) _____
- _____
- (ii) _____
- _____
6. (a) Outline any two (2) techniques used by developed countries to exercise neo-colonialism in Africa
- (i) _____(ii) _____
- _____
- (b) By the end of the Middle Stone Age, when human improved their stone tools, they discovered fire. Write the way through which fire was made _____

SECTION C (10 MARKS)

7. (a) Study the following figure carefully, then answer questions that follow by writing the correct answers in the space provided



- (i) What does line X represent?

- (ii) Line X divides the earth into two equal parts, East and West. Which side of line X is Tanzania located? _____
- (iii) Which side of line X will experience early sunset before other areas?

- (iv) Why areas that are found in the East of line X experience early sunrise than other areas?

- (b) The earth uses 1 hour to rotate 15 degrees of Longitude. Calculate the time that the earth will use to rotate 45 degree of Longitude

- (c) The atmosphere is divided into layers with different functions. Which layer is responsible for trapping ultraviolet rays from the sun?

- (d) There is a line that divides the earth into two equal halves. What is the name of that line? _____
- (e) The football match in Madrid located at 30°W started at 0700hours. At which time was a person in Rwanda 30°E watched the same game?

MASTERFUL EDUCATIONAL SERVICES PLATFORM (MESP - TANZANIA)



CONTACT: 0715 966 222

E-mail: mesptanzania@gmail.com

LOCATION: KIBAHA-MAILIMOJA

STANDARD SEVEN SERIES ASSESSMENT

SCIENCE AND TECHNOLOGY (05E)

TIME: 1:30 HOUR

MARCH 2024

SECTION A (20 MARKS)

1. For items (i) to (x), choose and write the letter of the correct answer in the box provided:

- (i) Safety signs provide instructions that can lead to the protection of living and non living organisms in the environment. Why are some safety signs presented with texts?
(a) To facilitate interpretation (c) To war against risky behavior (e) To reduce traffic jams
(b) To facilitate accidents (d) To make them attractive
- (ii) Msuya is a welder. He fuses metals together with consumable electrode coated in flux. What precautions would you advice him to take to protect his eyes against ultraviolet and infrared rays of welding arc while letting him to view the molten weld pool?
(a) Masks (b) Shoe covers (c) Coveralls (d) Gloves (e) welding helmet
- (iii) If simple machine is the opposite of a complex machine, which one of the following is a complex machine?
(a) Wedge (b) Lever (c) Mortise lock (d) Pulley (e) Inclined plane
- (iv) Peter went to the shamba to collect seeds of monocotyledonous crops only. Which one was not among the seeds Peter collected?
(a) Sorghum (b) Maize (c) Finger millet (d) Wheat (e) Beans
- (v) A plant has three main parts. Which part is responsible for manufacturing food for plants?
(a) Seed (b) Root (c) Stem (d) Leaf (e) Stalk
- (vi) Arafat was asked to list down two crops which store their foods in stems. Which set was correctly listed by Arafat?
(a) Yams and ginger (c) Sugarcane and beans (e) Maize and yams
(b) Carrot and wheat (d) Sweet potato and sugarcane
- (vii) Monica drew a diagram showing parts of a flower. If she labeled only a female reproductive part of a flower. Which part of part of flower do you think Monica labeled?
(a) Ovary (b) Pistil (c) Petals (d) Sepals (e) Stamen

- (viii) A male reproductive system of a human being has four parts. Which part allows sperms to pass from the testes to the urethra?
 (a) Penis (b) Gall bladder (c) Sperm duct (d) Testes (e) Urethra
- (ix) The science subject teacher taught grade six pupils about different types of soil and their respective significances. According to him, which type of soil is suitable for making bricks?
 (a) Sandy (b) Loam (c) Clay (d) Silt (e) Dusty
- (x) The human excretory system is composed of four major organs. Which organ is responsible for excretion of carbon dioxide and excess water?
 (a) Nose (b) Lungs (c) Kidney (d) Skin (e) Liver

2. Match items in List A with corresponding answers from List B

LIST A	ANS	LIST B
(i) Internet		A. Stores urea
(ii) Liver		B. The largest WAN network in the world
(iii) Renal artery		C. Takes blood to the kidney
(iv) Haemophilia		D. Table salt
(v) NaCl		E. Failure of blood to clot

3. Fill in the blanks with the correct answers

- (i) Ray prepared a budget for her expenditures to check how much will possibly be spent for the whole month. Which computer program do you think did she use to do his task? _____
- (ii) Given $X + \text{Water} + \text{Oxygen} = \text{Rust}$, what is the chemical symbol of the element represented by letter **X**?

- (iii) Calculate the resistance of an electric cooker element if the current in the element is 3.2A and the potential difference is 24V _____
- (iv) Biogas is one of the renewable sources of energy. Which gas forms the largest proportion of biogas? _____
- (v) The most commonly used search engine in the world is

SECTION B (20 MARKS)

4. (i) The device that is used to determine the amount of resistance in a circuit is called

- (ii) What gas is required for a fire to start? _____
- (iii) How many teeth does an adult human being have? _____

5. (i) What is the permanent method of family planning among men?

(ii) Where are blood cells manufactured?

(iii) Which sign do all arithmetic formulas in excel program start with?

6. (i) People with less blood are advised to eat food rich in

(ii) A torch with four cells of 1.5 volts each connected in series produces 3 amperes.

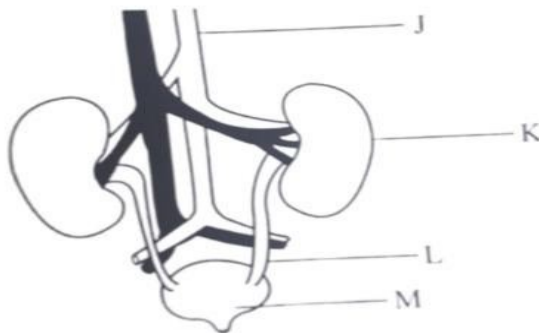
What is the resistance in the circuit? _____

(iii) In order to increase soil fertility, which crops is a farmer advised to grow?

(iv) Rabbo used a force of 10N to push a tank at a distance of 6 meters. What is the work done? _____

SECTION C (10 MARKS)

7. Study the figure below, then answer items (i) to (iii)




(i) What does the diagram below represent? _____

(ii) What is the function of the part labeled L? _____

(iii) Which part of the diagram above remove waste products from the blood and produce urine? _____

8. Study the diagram below, then answer items (i) and (ii)



(i) The gas marked Y is called _____

(ii) The gas marked X is called _____

MASTERFUL EDUCATIONAL SERVICES PLATFORM (MESP - TANZANIA)



CONTACT: 0715 966 222

E-mail: mesptanzania@gmail.com

LOCATION: KIBAHA-MAILIMOJA

STANDARD SEVEN SERIES ASSESSMENT

MATHEMATICS (04E)

TIME: 1:30 HOUR

MARCH 2024

SECTION A: MATHEMATICAL OPERATIONS (10 MARKS)

No	QUESTION	WORK	ANSWER
1(i)	$1.06 + 12.034 =$		
(ii)	$8 - 3\frac{1}{12} + 5\frac{5}{8} =$		
(iii)	$(6\text{km } 896\text{m}) \div 8 =$		
(iv)	$192 \times 43 =$		
(v)	$6\frac{1}{3} - 2\frac{2}{5} =$		
(vi)	$0.867 \div 0.17 =$		
(vii)	$8 + 9454 + 27 + 356 =$		
(viii)	$2\frac{5}{6} \div 4\frac{1}{4} =$		
(ix)	$9 - 3 \div \frac{1}{3} + 2 =$		
(x)	$(-4 + -3)^2 =$		

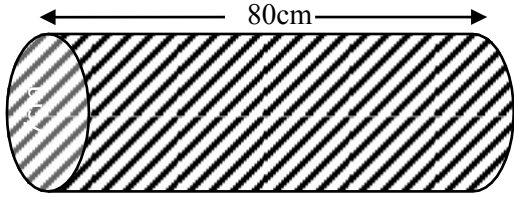
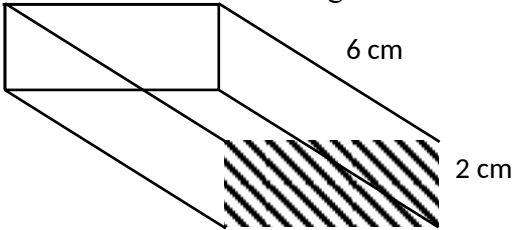
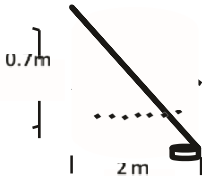
--	--	--	--

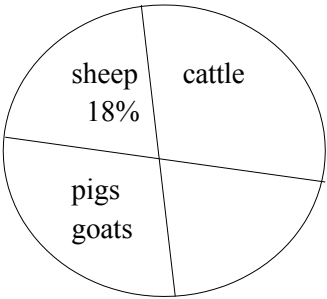
SECTION B: WORD PROBLEMS (30 MARKS)

No	QUESTION	WORK	ANSWER
2(i)	A price of beef has risen by 25%. If the new price is sh. 5000 a kilo, find the old price before the increase		
(ii)	16 tailors can sew some clothes for 15 days. If 4 more tailors join them, in how many days will that work be completed?		
(iii)	How many pieces of square tiles with 10cm sides will be required to lay on a floor with dimensions of 6m by 3m?		
(iv)	Rearrange the following fractions in ascending order: $\frac{3}{4}, \frac{11}{12}, \frac{5}{6}, \frac{1}{2}, \frac{7}{8}$		
(v)	The price of a mango is sh. 200 more than the price of an orange. If I bought 2 mangoes and 4 oranges and paid sh. 1600, what is the price of an orange?		
(vi)	The price of rice has gone down in the ratio of 9:11. Find the price of rice, if the old price was sh. 1320		
3(i)	The diameter of a tyre of bajaj is 49cm. How many times shall the tyre rotate in a distance of 154cm?		
(ii)	The area of a square building plot is $30\frac{1}{4}\text{m}^2$. Find the length of the cable that can be laid around the plot once		
(iii)	The area of a semi circle is $19\frac{1}{4}\text{cm}^2$. Find its perimeter		
4(i)	$\frac{2}{3}$ of a certain number is 36. Find $\frac{1}{2}$ of that number		
(ii)	A 6m steel rod weighs 15kg. How long will the steel rod weighing 100kg be?		
(iii)	Find the product of all factors of 24		
5(i)	Find the sum of all odd numbers between 40 and 66 which also divisible by 7		
(ii)	If $8 : Y = \frac{2}{3} : \frac{1}{4}$, find the value of Y		
(iii)	The age of the child is $\frac{1}{5}$ of that of her Mother. After 5 years, the age of the child		

	will be $\frac{1}{3}$ of her mother's. find the present age of the child		
6(i)	The capacity of a cylinder is 88litres. If its height is 70cm, find its diameter		
(ii)	A pipe of water has a length of 6.4m, a radius of its hole is 7cm and outer radius is 7.7cm. Find the volume of the steel material used to make the pipe.		
(iii)	Find a perimeter of a square whose area is 64cm^2 .		

SECTION C: PICTORIAL INTERPRETATION (10 MARKS)

No	QUESTION	WORK	ANSWER
7(i)	<p>The circumference of the base of the figure below that has been perforated is 66cm. find the volume of the remaining portion.</p> 		
(ii)	<p>The figure below is painted on one side as shown below. What percentage is the painted to the surface of the whole figure?</p> 		
(iii)	<p>Some water was put into the cylinder below to its half capacity. How many litres of water were put? (Use $\pi = 3.14$)</p> 		
8	<p>The chart below shows various livestock kept by Mr Zengo. If the total of all his livestock is 1400,</p>		

(i)			
(ii)	<p>Find the number of cattle he kept</p> <p>If the number of sheep was given in degrees, how many degrees would be?</p>		

MASTERFUL EDUCATIONAL SERVICES PLATFORM (MESP - TANZANIA)



CONTACT: 0715 966 222

E-mail: mesptanzania@gmail.com

LOCATION: KIBAHA-MAILIMOJA

STANDARD SEVEN SERIES ASSESSMENT

ENGLISH (02)

TIME: 1:30 HOUR

MARCH 2024

SECTION A (20 MARKS)

SECTION A: LISTENING SKILLS, GRAMMAR AND VOCABULARIES

1. Listen carefully to the story, then write the letter of the correct answer in the bracket provided

- (i) Who is Haula Bairu?
a) A standard three girl c) The first Tanzania woman pilot e) The class teacher
b) A subject teacher d) Sophie's teacher
- (ii) Who wants to be a pilot?
a) Haula Bairu b) Sophie c) Ambitious teacher d) Teacher Sophie e) First lady
- (iii) Who narrated story about Haula Bairu to the class?
a) Sophie c) Magazine e) Teacher
b) Haula Bairu d) First Tanzanian woman pilot
- (iv) What is the magazine about?
a) A story about Sophie c) A story about teacher e) A story about Haula Bairu
b) A plane and a pilot d) A picture of Haula
- (v) What were the pupils very interested to hear about?
a) Sophie's ambition c) Teacher's story e) Magazine
b) The first Tanzanian woman pilot d) Sophie

2. Choose and write the letter of the correct answer in the bracket provided

- (i) I met her _____ her homework alone.
a) Did b). Does c). Do d). Doing e). Done
- (ii) If I were you, I _____ that coat, it's much too expensive compared to the amount we have.

a) Won't buy b). Don't buy c). I would by d). Wouldn't buy e). I had

bought

- (iii) The deer was _____ by the time the hunter saw it
a. Died b). Has died c). Dies d). Dead e). Die
- (iv) Mathematics _____ my best subject at school
a. Are b). Were c). Have d). Is e). Does
- (v) "Please can I _____ your bicycle?" Someone has taken mine.
a. Lend b). Lending c). Borrow d). Borrowing e). To borrow

3. Fill in the gaps with then correct words from the brackets

- (i) This is _____ umbrella which I was talking about (the, an, a)
- (ii) If you walk slowly, you will miss the bus. What type of conditional sentence is this? (Type I, Type II, Type III)
- (iii) Will you _____ gone to the cinema by midnight tonight? (have, has, been)
- (iv) The girl _____ I met yesterday was my daughter's roommate at school (who, whom, whose)
- (v) No sooner had Amina left for Arusha than her mother _____ of malaria (dead, died, has died)

4. Match items in List A with the corresponding answers from List B

LIST A	ANS	LIST B
(i) Kennel		A. Hen
(ii) Coop		B. Lion
(iii) Cage		C. Pig
(iv) Den		D. Cattle
(v) Sty		E. Dog

SECTION B: COMPOSITION (10 MARKS)

5. The following sentences are jumbled. Re arrange them by giving them letters A, B, C, D and E

- (i) He had to walk many kilometers before entering the thick forest
- (ii) Malomo was very daring, he went hunting alone
- (iii) When he was in the middle of the forest, he felt some movement from opposite direction
- (iv) In the forest, he walked very carefully so as not to break even a piece of dry leaf
- (v) His hair stood up, he hid behind a big tree and held his weapons ready to fight against

SECTION C: (20 marks)

6. Fill in the blanks with the correct answers

- (i) A suspect is _____ until proved guilty.
- (ii) We saw a _____ of baboons when we visited Gombe National park
- (iii) A coop is for hen as _____ for pig
- (iv) Mahona is a _____ because is a native of Holland.
- (v) _____ makes furniture.

7. Read the poem below to answer items (i) – (v)

*I love my country,
A land of many waters,
A land of green plants and beautiful mountain,
Where the rains touch the land*

*I love my country
I love her blue horizon
I love her beautiful ocean and vast fertile
land I don't want it to end*

*I love my country
From the deepest part of my heart
A land of peace and opportunities
I vow to stand up for my country till the day of my last breath,*

Questions

- (i) What is the poem about? _____
- (ii) How does a poet feel about his country?

- (iii) What does the poet mean in the last line of the last stanza?

- (iv) Which word could be used by a poet to replace the word “*opportunities*”?

- (v) Who is the persona in the poem? _____

MASTERFUL EDUCATIONAL SERVICES PLATFORM (MESP - TANZANIA)



CONTACT: 0715 966 222

E-mail: mesptanzania@gmail.com

LOCATION: KIBAHA-MAILIMOJA

UPIMAJI WA KILA MWEZI WA DARASA LA SABA KISWAHILI [01]

MUDA: SAA 1:40

MACHI 2024

SEHEMU A (ALAMA 20)

1. Sikiliza kwa makini habari kisha jibu maswali (i) - (v)

- (i) Kwa mujibu wa habari hii, Esta alikuwa wapi?
A. Ruyani B. Baharini C. Kitandani D. A na C E. Mbinguni
- (ii) Esta aliita kwa sauti mithili ya baragumu. Je, nini kisawe cha neno baragumu ?
A. Tarumbeta B. Yowe C. Kengele D. Kinubi
E. Zeze
- (iii) Wakati Esta akifikiri namna ya kujiokoa, nini kilitokea ghafla?
A. Watu wote walimezwa D. Watu sita walimezwa na jitu
B. Alimezwa kama kumbikumbi E. Malori mawili yalimezwa
C. Watu sita walikufa
- (iv) Je, ni mchezo gani wa mpira umetajwa katika habari hii?
A. Pete B. Wavu C. Magongo D. Miguu E. Kabatini
- (v) Kichwa cha habari hii kingefaa kiitweje?
A. Esta ndotoni C. Esta na jitu kubwa
B. Jitu kubwa D. Esta chakudeka E. Mama Esta

2. Chagua herufi ya jibu sahihi kisha uiandike katika mabano uliyopewa

- (i) Baba **lishe** amepika sambusa tamu. Neno lililopigiwa mstari limetumika kama
A. Nomino B. Kiwakilihi C. Kivumihi D. Kielezi E. Kitenzi

- (ii) Jozi ipi kati ya hizi si vitate?
 A. Dhahabu, zahabu D. Dhifa, sifa
 B. Madhabahu, mazabahu E. Thumni, sumni
 C. Thamani, samani
- (iii) Ziwa Tanganyika lina kina kirefu. Je, neno lipi limetumika kama kivumishi?
 A. Ziwa B. Tanganyika C. lina D. kina E. kirefu
- (iv) Zawadi alimpa Zawadi zawadi ya Zawadi. Je, sentenssi hii ina nomino pekee ngapi?
 A. Moja B. Mbili C. Tatu D. Nne
 E. Tano
- (v) La mgambo likilia kuna jambo. Uchanganuzi sahihi wa sentensi hii ni upi?
 A. W+T+t+N B. U+N+T+Ts+N E. W+Ts+T+N
 B. W+N+Ts+T+ N D. V+N+T+t+N
- (vi) Umoja wa sentensi, “Nyimbo za mataifa yetu ni nzuri” ni upi?
 A. Wimbo wa taifa letu ni mzuri D. Nyimbo za taifa letu ni nzuri
 B. Nyimbo ya taifa letu ni nzuri E. Wimbo wa taifa letu ni nzuri
 C. Wimbo wa mataifa yetu ni mzuri
- (vii) Mwizi aliyekamatwa jana ameuawa leo. Je, hii ni aina gani ya sentensi?
 A. Sahili B. Changamano C. Shurutia D. Ambatano E. Tata
- (viii) Nini jibu la kitendawili hiki? Anachora ingawa hajui achoracho
 A. Kobe B. Konokono C. Jongoo D. Nyoka E. Mtoto
- (ix) Kipya kinyemi ingawa kidonda. Je, neno ingawa limetumika kama aina gani ya neno?
 A. Nomino B. Kiunganishi C. Kihisishi D. Kivumihi E. Kiwakilishi
- (x) Babu alisema, umoja ni nguvu. Je, ukamilifu wa methali hii ni upi?
 A. Utengano ni ahadi C. Utengano ni ukorofi E. Utengano ni udhaifu
 B. Utengano ni usaliti D. Utengano ni umoja

3. Oanisha maneno yaliyo kwenye kifungu A na yale yaliyo kwenye kifungu B ili kuleta maana iliyokusudiwa

KIFUNGU A	JIBU	KIFUNGU B
(i) Muongo		A. U-YA
(ii) Kimatu		B. Nzige
(iii) Mutribu		C. Msanii wa muziki wa taarabu
(iv) Paa		D. Kipindi cha muda wa miaka kumi
(v) Kaditama		E. Mwisho

SEHEMU B (ALAMA 20)

4. Jaza nafasi wazi kwa majibu mafupi

- (i) Neno linaloelezea zaidi juu ya nomino au kiwakilishi

- (ii) Sehemu kuu tatu za kamusi ni utangulizi, matini na

- (iii) Kipengele cha pili katika barua rasmi _____
- (iv) Babu yangu ni mtaalamu wa elimu ya nyota. Kwa hiyo babu yangu ni

- (v) Kinyume cha shababi _____

5. Soma shairi kisha jibu maswali

yanayofuata Kufaulu ni gharama, lazima
uchacharike, Ukiwa wa lelemama, subiri
uaibike,
Maisha kuna kukwama, usiombe yakufike,
Tafuta sana elimu, ikufae maishani.

Elimu ndugu gharama, usidhani ni utani,
Usome kwa kujituma, usicheze darasani,
Siku la saba kukoma, ni mateso mitaani,
Tafuta sana elimu, ikufae maishani.

Maswali

- (i) Shairi lina beti ngapi? _____
- (ii) Je, mstari mmoja wa shairi una mizani mingapi?

- (iii) Shairi hili lina aina gani ya kituo? _____

- (iv) Je, shairi hili ni la aina gani kimuundo? _____
- (v) Nini maudhui ya shairi hili? _____

SEHEMU C: UTUNGAJI (ALAMA 10)

6. Panga sentensi zifuatazo ili ziwe na mtiririko wenye mantiki

kwa kuzipa herufi A, B, C, D na E

- (i) Utakosa mavuno na hatimaye utalalamika kuwa mbuzi wa masikini hazai
- (ii) Baadhi ya mimea hustawi sana sehemu za baridi na mingine za joto
- (iii) Usipozingatia hali ya hewa mazao yatakuwa hafifu
- (iv) Uchunguzi wa mimea unaweza kulenga hali ya hewa
- (v) Ni vema kuchunguza hali ya hewa inayofaa kwa mimea unayotaka kupanda

UMAHIRI WA KUSIKILIZA

“Kaduguda, Kaduguda”, Esta aliita kwa sauti kubwa mithili ya baragumu lakini hakuitikiwa. Jitu kubwa lililokuwa likimeza magari na vitu vyote vitembeavyo barabarani lilikuwa likiendelea kuja upande wake. Hakika lilikuwa pandikizi hasa, kiganja chake kilitosha kujenga kiwanja cha mpira wa pete, domo lake liliweza kumeza malori mawili kwa mara moja.

Wakati Esta akiendelea kufikiri namna ya kujiokoa, ghafla watu sita waliokuwa karibu yake walitafunwa kama kumbikumbi mdomoni mwa jitu hilo. Alipiga kelele kubwa za kuomba msaada. Nyumba nzima walishtuka kumuona Esta ameamka na kukaa kitandani huku jasho likimtoka. Mama yake, alimbembeleza alale kwani ulikuwa usiku wa manane.

LISTENING SKILLS

Sophie told her teacher all about her ambition. She told her teacher that she wanted to be a pilot. Her teacher was very interested. Sophie showed her teacher a magazine. She showed her a story about Haula Bairu. Her teacher read a story and then she talked to the whole class about Haula. The pupils were very much interested to hear about the very first Tanzanian woman pilot